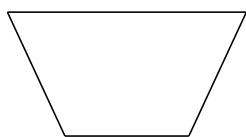
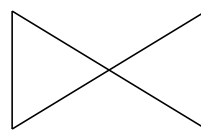



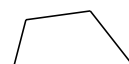
Classification de Quadrilatères (H)

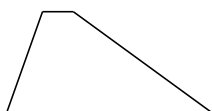
Identifiez chaque quadrilatère.










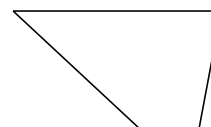






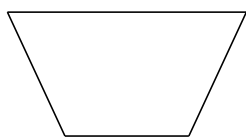




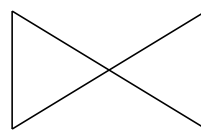


Classification de Quadrilatères (H) Solutions

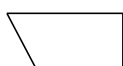
Identifiez chaque quadrilatère.



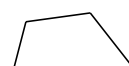
trapèze isocèle



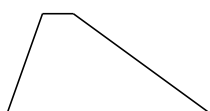
noeud papillon



trapèze rectangle




quadrilatère



trapèze



rectangle



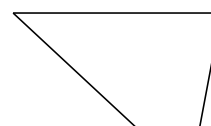
carré



cerf-volant



fléchette



trapèze