



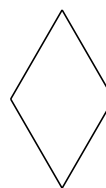
Classification de Quadrilatères (G)

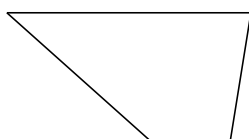
Identifiez chaque quadrilatère.



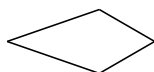


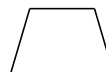


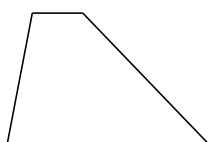


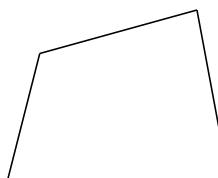












Classification de Quadrilatères (G) Solutions

Identifiez chaque quadrilatère.



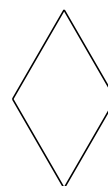
parallélogramme



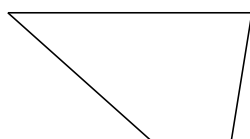
carré



noeud papillon



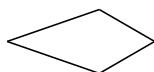
losange



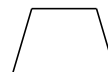
trapèze



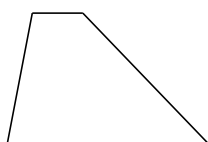
rectangle



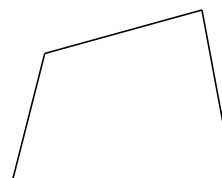
cerf-volant



trapèze isocèle



trapèze



quadrilatère