

# Classification de Quadrilatères (F)


Identifiez chaque quadrilatère.



\_\_\_\_\_



\_\_\_\_\_



\_\_\_\_\_



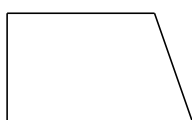
\_\_\_\_\_



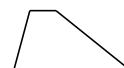
\_\_\_\_\_




\_\_\_\_\_



\_\_\_\_\_



\_\_\_\_\_



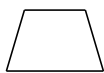
\_\_\_\_\_



\_\_\_\_\_

# Classification de Quadrilatères (F) Solutions


Identifiez chaque quadrilatère.



trapèze isocèle



cerf-volant



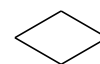
rectangle



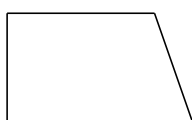
fléchette



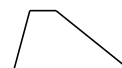
noeud papillon




losange



trapèze rectangle



trapèze



carré



fléchette