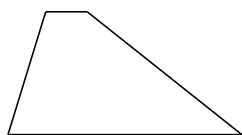
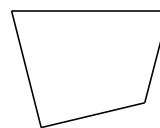



Classification de Quadrilatères (G)

Identifiez chaque quadrilatère.

















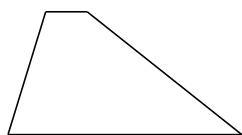




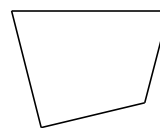


Classification de Quadrilatères (G) Solutions

Identifiez chaque quadrilatère.



trapèze



quadrilatère



parallélogramme



rectangle




losange




rectangle



carré



carré



rectangle



carré