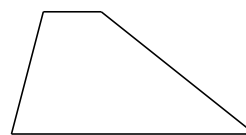


Classification de Quadrilatères (D)


Identifiez chaque quadrilatère.

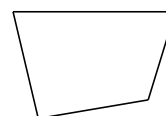









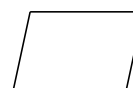










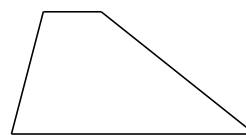


Classification de Quadrilatères (D) Solutions

Identifiez chaque quadrilatère.



rectangle




trapèze



carré



losange



rectangle




quadrilatère



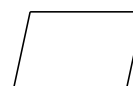
carré



rectangle



rectangle



parallélogramme