


Classification de Quadrilatères (B)

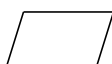
Identifiez chaque quadrilatère.

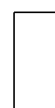


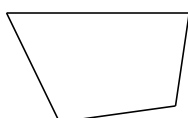






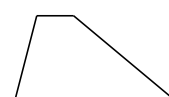













Classification de Quadrilatères (B) Solutions

Identifiez chaque quadrilatère.




rectangle



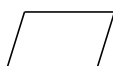
losange



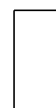
rectangle



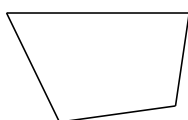
carré



parallélogramme




rectangle



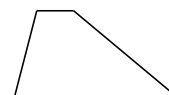
quadrilatère



carré



carré



trapèze