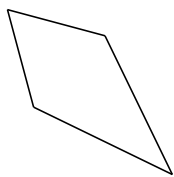
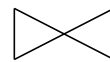



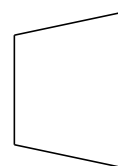
Classification de Quadrilatères (A)

Identifiez chaque quadrilatère.








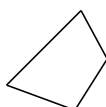


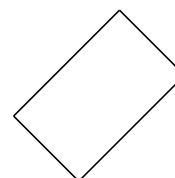






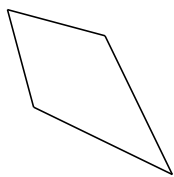




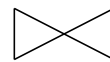


Classification de Quadrilatères (A) Solutions


Identifiez chaque quadrilatère.



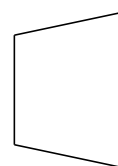
cerf-volant



noeud papillon



parallélogramme



trapèze isocèle



trapèze rectangle



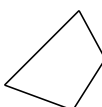
rectangle



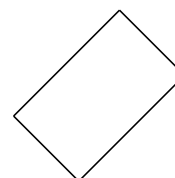
carré



losange



quadrilatère



rectangle