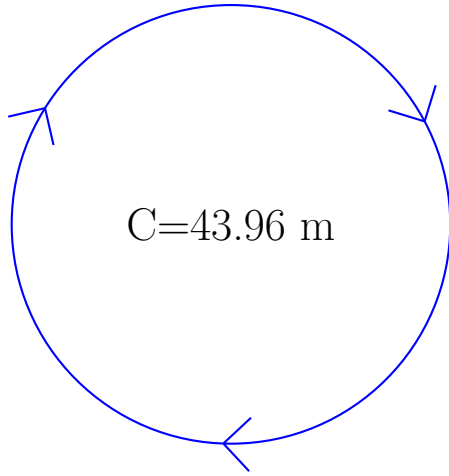
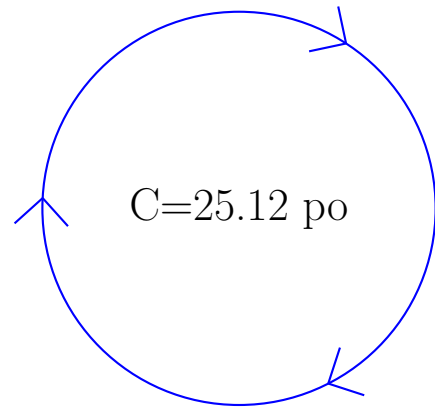


Calcul du Rayon et Diamètre des Cercles (A)

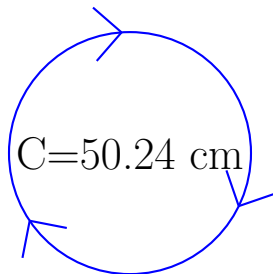
Calculez les mesures de chaque cercles à l'aide de la mesure donnée. Utilisez $\pi = 3.14$



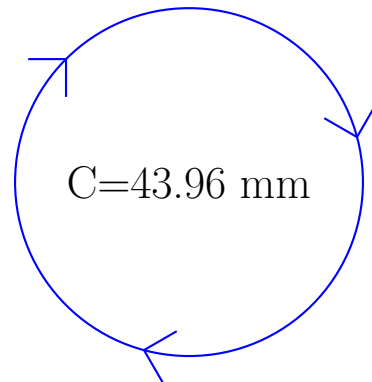
rayon = _____
diamètre = _____



rayon = _____
diamètre = _____



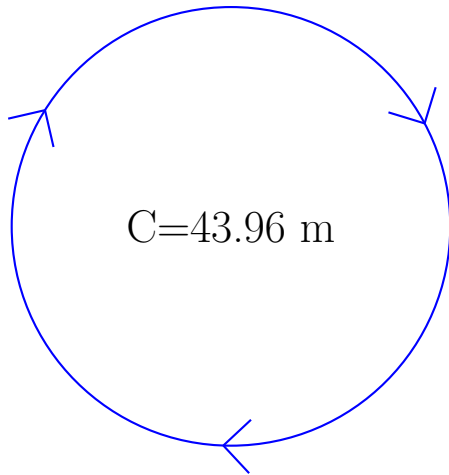
rayon = _____
diamètre = _____



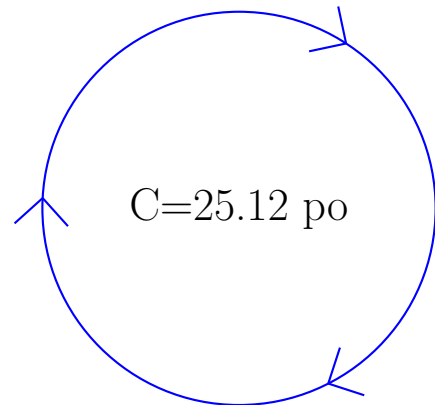
rayon = _____
diamètre = _____

Calcul du Rayon et Diamètre des Cercles (A) Solutions

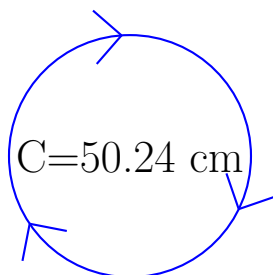
Calculez les mesures de chaque cercles à l'aide de la mesure donnée. Utilisez $\pi = 3.14$



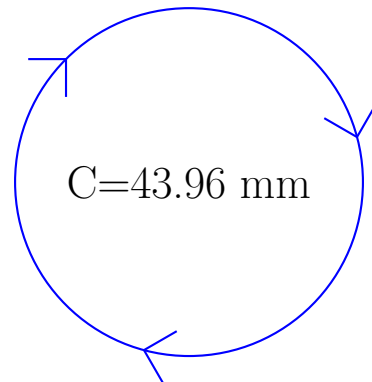
$$\begin{aligned} \text{rayon} &= \underline{7 \text{ m}} \\ \text{diamètre} &= \underline{14 \text{ m}} \end{aligned}$$



$$\begin{aligned} \text{rayon} &= \underline{4 \text{ po}} \\ \text{diamètre} &= \underline{8 \text{ po}} \end{aligned}$$



$$\begin{aligned} \text{rayon} &= \underline{8 \text{ cm}} \\ \text{diamètre} &= \underline{16 \text{ cm}} \end{aligned}$$



$$\begin{aligned} \text{rayon} &= \underline{7 \text{ mm}} \\ \text{diamètre} &= \underline{14 \text{ mm}} \end{aligned}$$