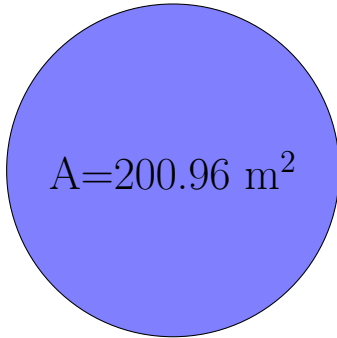
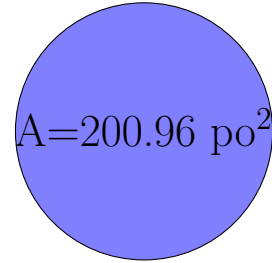


Calcul du Rayon et Diamètre des Cercles (A)

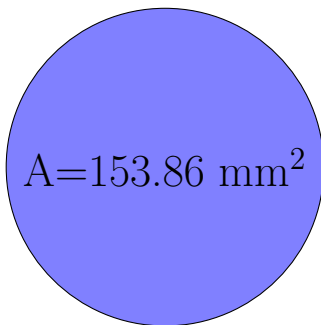
Calculez les mesures de chaque cercles à l'aide de la mesure donnée. Utilisez $\pi = 3.14$



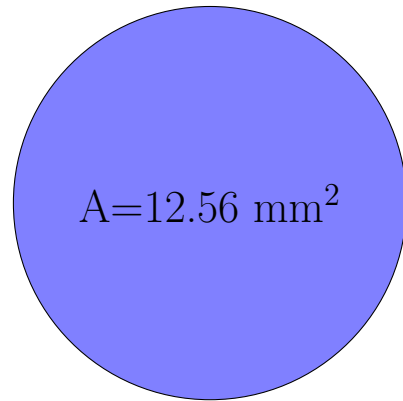
rayon = _____
diamètre = _____



rayon = _____
diamètre = _____



rayon = _____
diamètre = _____



rayon = _____
diamètre = _____