
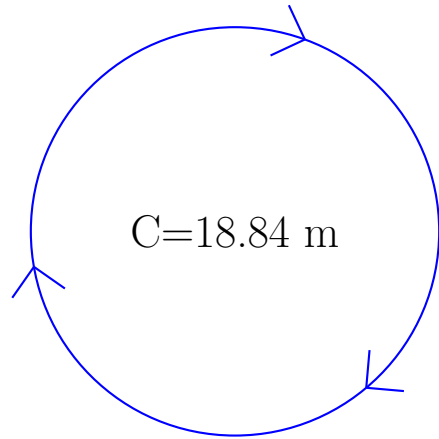


Calcul du Rayon et Diamètre des Cercles (F)


Calculez les mesures de chaque cercles à l'aide de la mesure donnée. Utilisez $\pi = 3.14$



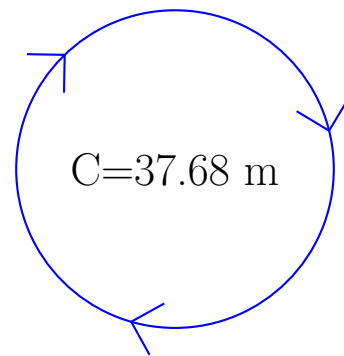
rayon = _____
diamètre = _____



rayon = _____
diamètre = _____




rayon = _____
diamètre = _____



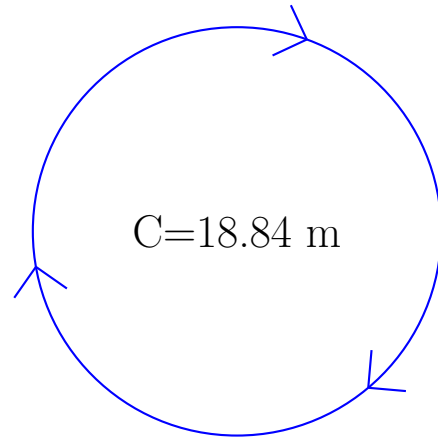
rayon = _____
diamètre = _____

Calcul du Rayon et Diamètre des Cercles (F) Solutions


Calculez les mesures de chaque cercles à l'aide de la mesure donnée. Utilisez $\pi = 3.14$



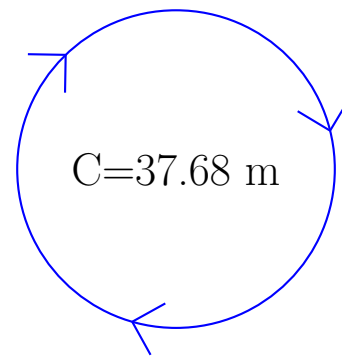
$$\begin{aligned} \text{rayon} &= \underline{7 \text{ cm}} \\ \text{diamètre} &= \underline{14 \text{ cm}} \end{aligned}$$



$$\begin{aligned} \text{rayon} &= \underline{3 \text{ m}} \\ \text{diamètre} &= \underline{6 \text{ m}} \end{aligned}$$



$$\begin{aligned} \text{rayon} &= \underline{2 \text{ m}} \\ \text{diamètre} &= \underline{4 \text{ m}} \end{aligned}$$



$$\begin{aligned} \text{rayon} &= \underline{6 \text{ m}} \\ \text{diamètre} &= \underline{12 \text{ m}} \end{aligned}$$