

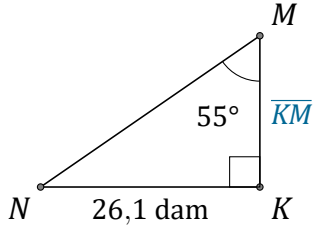
# Rapport Trigonométrique Tan (J)

Nom: \_\_\_\_\_

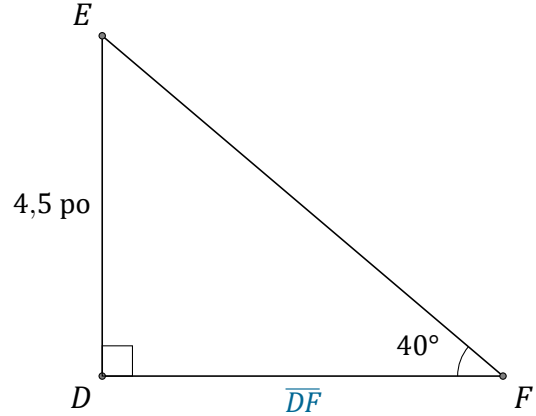
Date: \_\_\_\_\_

Trouvez la mesure d'un côté avec le rapport trigonométrique tangente:

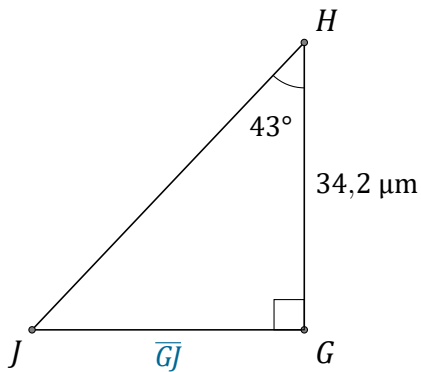
$$\tan(\alpha) = \frac{O}{A}$$



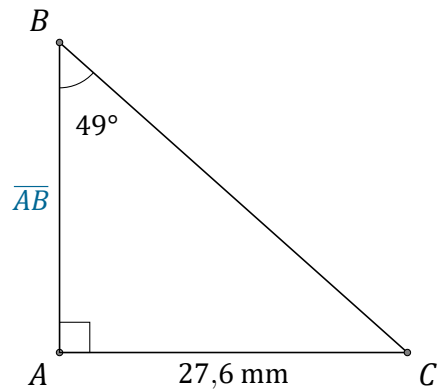
$$\overline{KM} = \underline{\hspace{2cm}}$$



$$\overline{DF} = \underline{\hspace{2cm}}$$



$$\overline{GJ} = \underline{\hspace{2cm}}$$



$$\overline{AB} = \underline{\hspace{2cm}}$$