

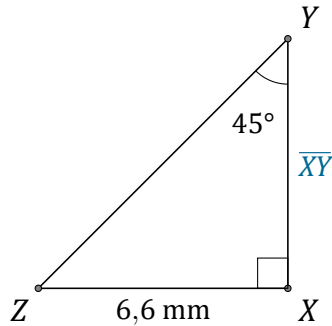
# Rapport Trigonométrique Tan (H)

Nom: \_\_\_\_\_

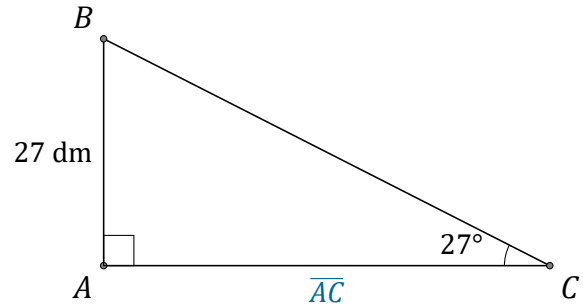
Date: \_\_\_\_\_

Trouvez la mesure d'un côté avec le rapport trigonométrique tangente:

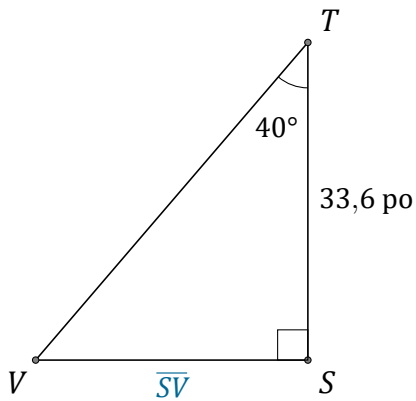
$$\tan(\alpha) = \frac{O}{A}$$



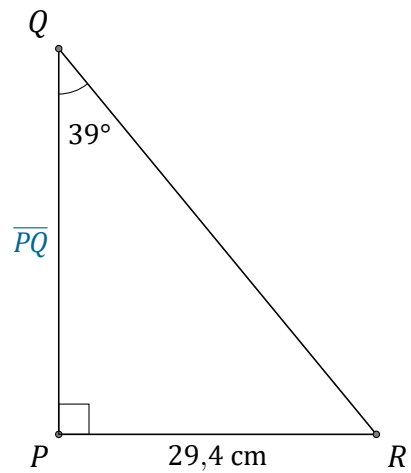
$$\overline{XY} = \underline{\hspace{2cm}}$$



$$\overline{AC} = \underline{\hspace{2cm}}$$



$$\overline{SV} = \underline{\hspace{2cm}}$$



$$\overline{PQ} = \underline{\hspace{2cm}}$$