

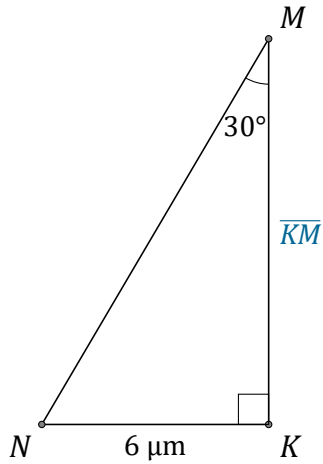
Rapport Trigonométrique Tan (B)

Nom: _____

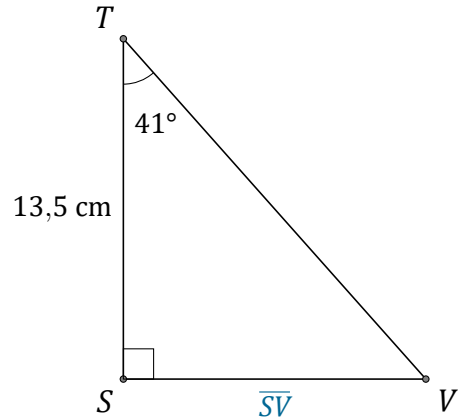
Date: _____

Trouvez la mesure d'un côté avec le rapport trigonométrique tangente:

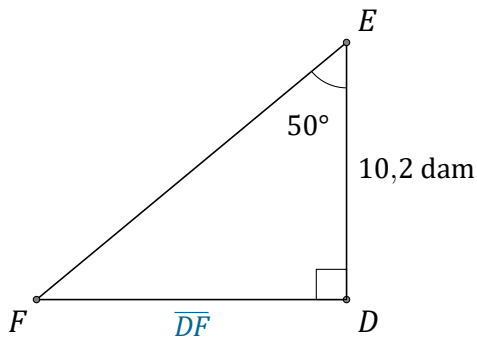
$$\tan(\alpha) = \frac{O}{A}$$



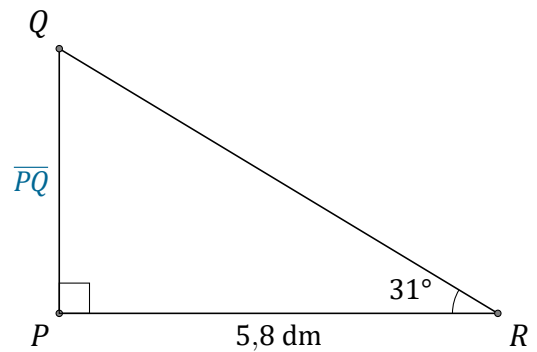
$$\overline{KM} = \underline{\hspace{2cm}}$$



$$\overline{SV} = \underline{\hspace{2cm}}$$



$$\overline{DF} = \underline{\hspace{2cm}}$$



$$\overline{PQ} = \underline{\hspace{2cm}}$$