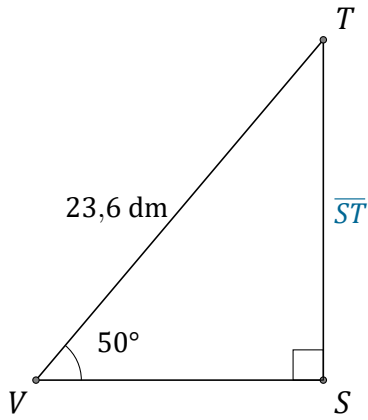


Rapport Trigonométrique Sin (C)

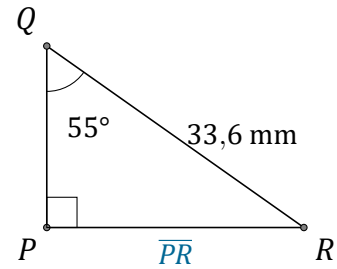
Nom: _____

Date: _____

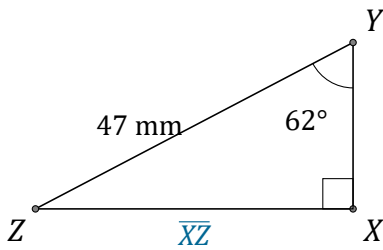
Trouvez la mesure d'un côté avec le rapport trigonométrique sinus: $\sin(\alpha) = \frac{O}{H}$



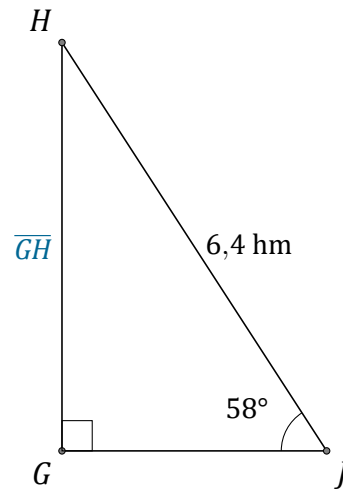
$$\overline{ST} = \underline{\hspace{2cm}}$$



$$\overline{PR} = \underline{\hspace{2cm}}$$



$$\overline{XZ} = \underline{\hspace{2cm}}$$



$$\overline{GH} = \underline{\hspace{2cm}}$$