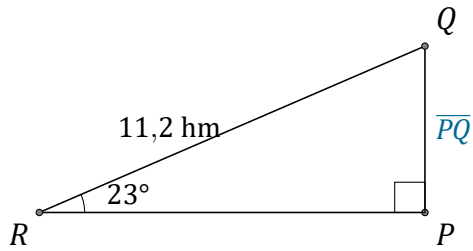


Rapports Trigonométriques (E)

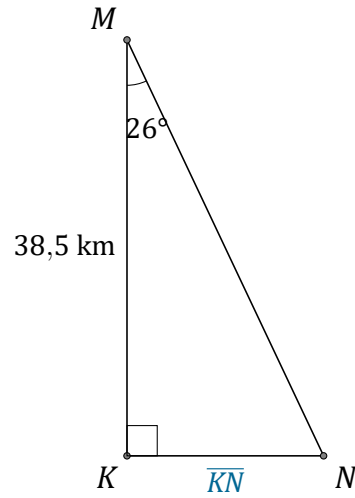
Nom: _____

Date: _____

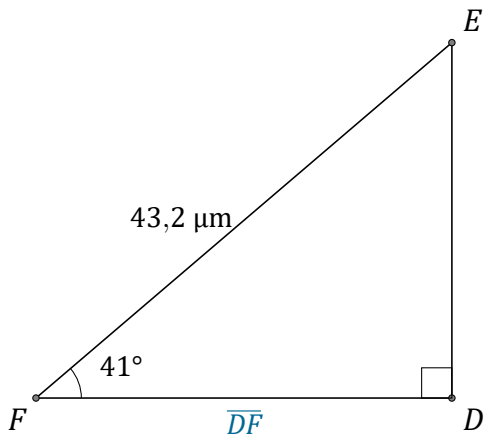
Trouvez la mesure d'un côté avec les rapports trigonométriques.



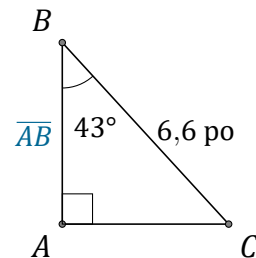
$$\overline{PQ} = \underline{\hspace{2cm}}$$



$$\overline{KN} = \underline{\hspace{2cm}}$$



$$\overline{DF} = \underline{\hspace{2cm}}$$



$$\overline{AB} = \underline{\hspace{2cm}}$$