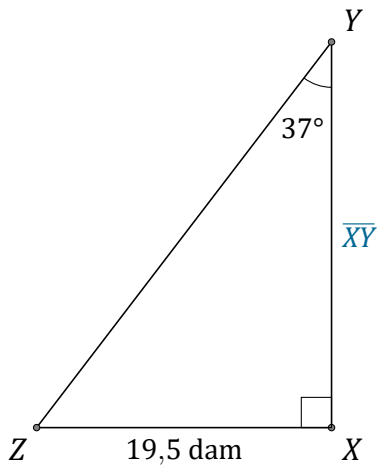


# Rapports Trigonométriques (A)

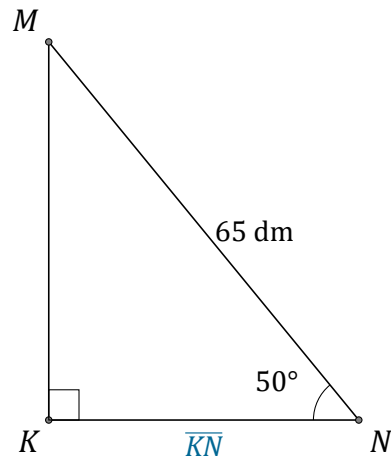
Nom: \_\_\_\_\_

Date: \_\_\_\_\_

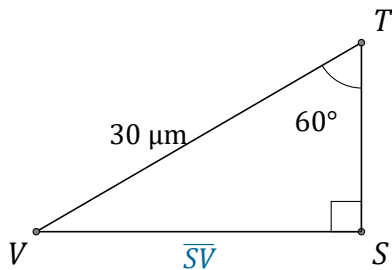
Trouvez la mesure d'un côté avec les rapports trigonométriques.



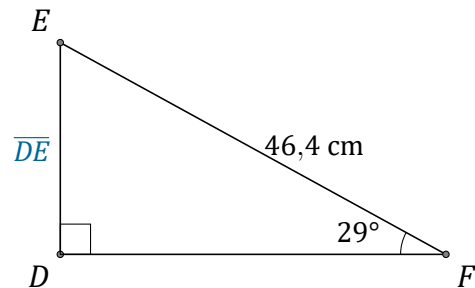
$$\overline{XY} = \underline{\hspace{2cm}}$$



$$\overline{KN} = \underline{\hspace{2cm}}$$



$$\overline{SV} = \underline{\hspace{2cm}}$$



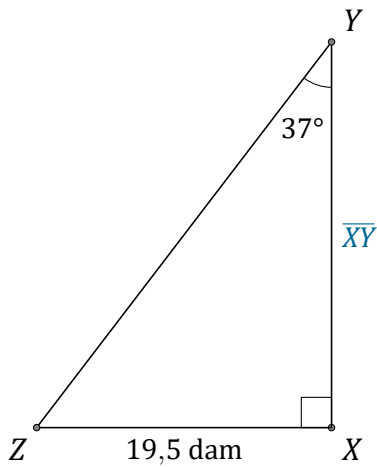
$$\overline{DE} = \underline{\hspace{2cm}}$$

# Rapports Trigonométriques (A) Réponses

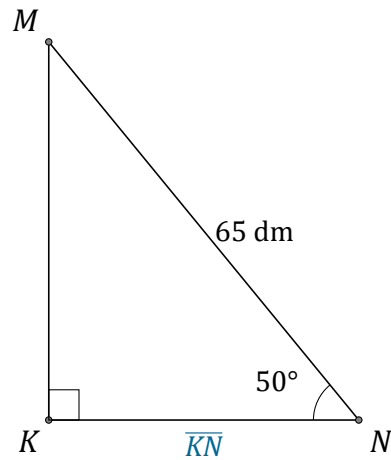
Nom: \_\_\_\_\_

Date: \_\_\_\_\_

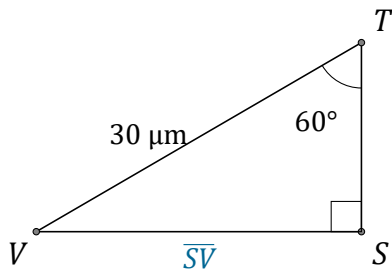
Trouvez la mesure d'un côté avec les rapports trigonométriques.



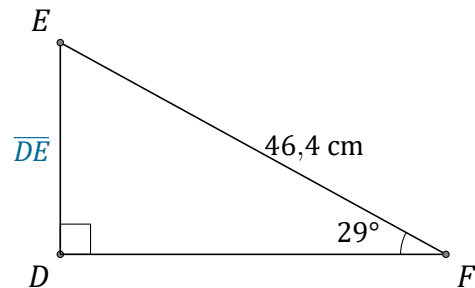
$$\overline{XY} = \underline{25,9 \text{ dam}}$$



$$\overline{KN} = \underline{41,8 \text{ dm}}$$



$$\overline{SV} = \underline{26 \mu\text{m}}$$



$$\overline{DE} = \underline{22,5 \text{ cm}}$$