

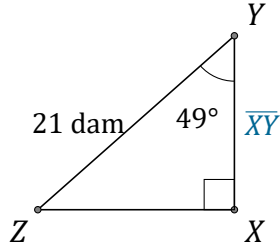
Rapport Trigonométrique Cos (H)

Nom: _____

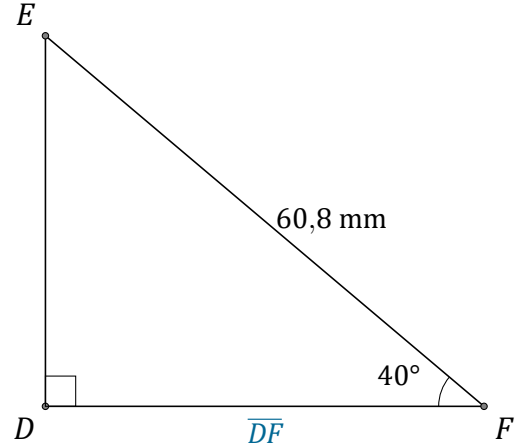
Date: _____

Trouvez la mesure d'un côté avec le rapport trigonométrique cosinus:

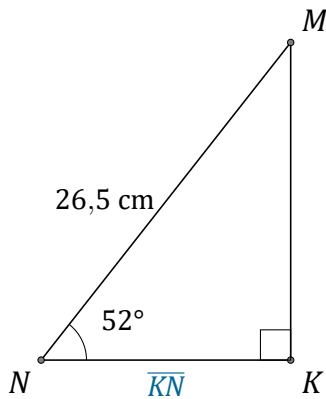
$$\cos(\alpha) = \frac{A}{H}$$



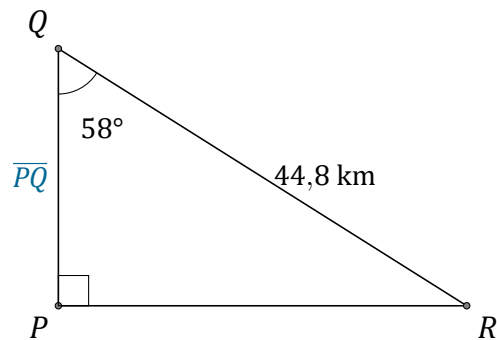
$$\overline{XY} = \underline{\hspace{2cm}}$$



$$\overline{DF} = \underline{\hspace{2cm}}$$



$$\overline{KN} = \underline{\hspace{2cm}}$$



$$\overline{PQ} = \underline{\hspace{2cm}}$$

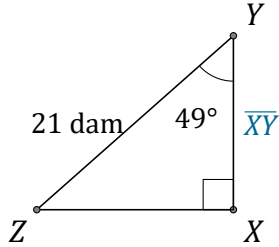
Rapport Trigonométrique Cos (H) Réponses

Nom: _____

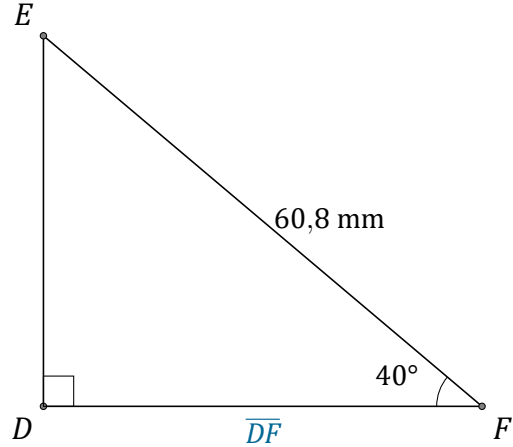
Date: _____

Trouvez la mesure d'un côté avec le rapport trigonométrique cosinus:

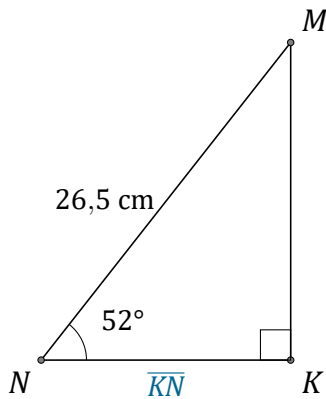
$$\cos(\alpha) = \frac{A}{H}$$



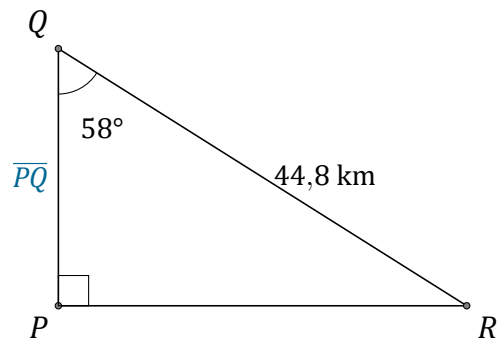
$$\overline{XY} = \underline{13,8 \text{ dam}}$$



$$\overline{DF} = \underline{46,6 \text{ mm}}$$



$$\overline{KN} = \underline{16,3 \text{ cm}}$$



$$\overline{PQ} = \underline{23,7 \text{ km}}$$