

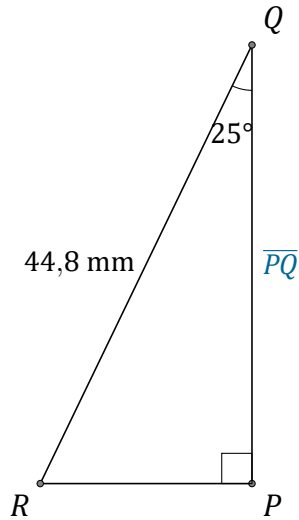
Rapport Trigonométrique Cos (F)

Nom: _____

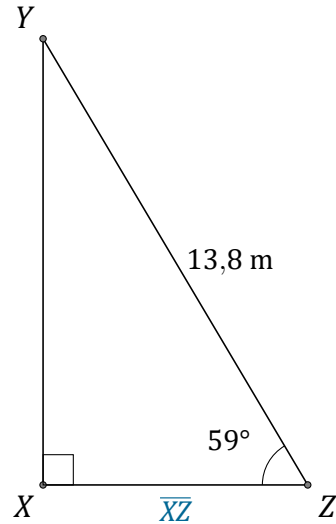
Date: _____

Trouvez la mesure d'un côté avec le rapport trigonométrique cosinus:

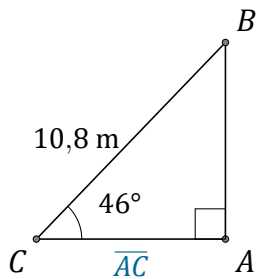
$$\cos(\alpha) = \frac{A}{H}$$



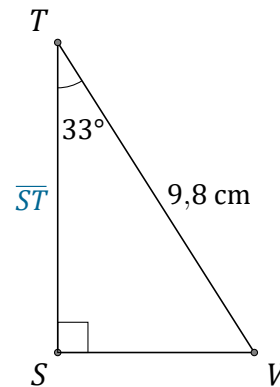
$$\overline{PQ} = \underline{\hspace{2cm}}$$



$$\overline{XZ} = \underline{\hspace{2cm}}$$



$$\overline{AC} = \underline{\hspace{2cm}}$$



$$\overline{ST} = \underline{\hspace{2cm}}$$

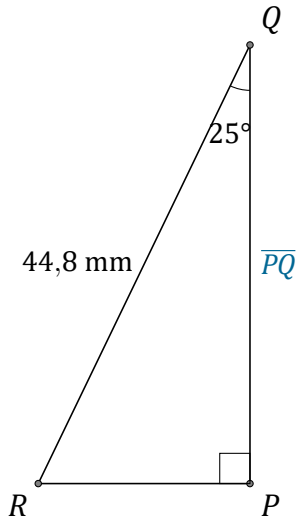
Rapport Trigonométrique Cos (F) Réponses

Nom: _____

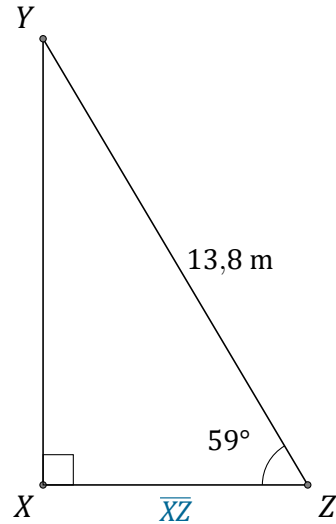
Date: _____

Trouvez la mesure d'un côté avec le rapport trigonométrique cosinus:

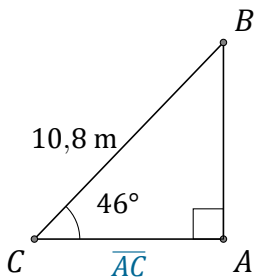
$$\cos(\alpha) = \frac{A}{H}$$



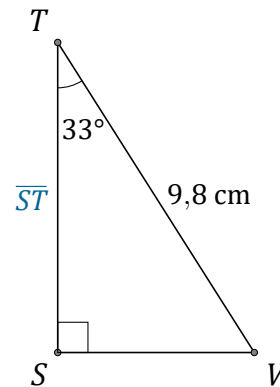
$$\overline{PQ} = \underline{40,6 \text{ mm}}$$



$$\overline{XZ} = \underline{7,1 \text{ m}}$$



$$\overline{AC} = \underline{7,5 \text{ m}}$$



$$\overline{ST} = \underline{8,2 \text{ cm}}$$