

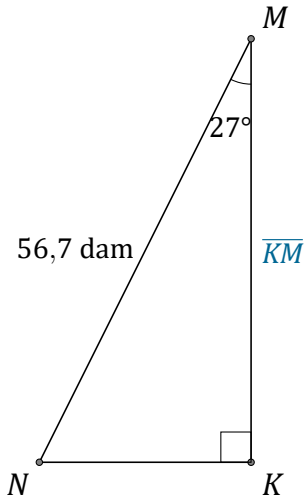
Rapport Trigonométrique Cos (C)

Nom: _____

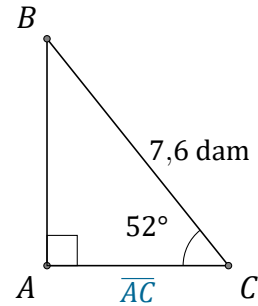
Date: _____

Trouvez la mesure d'un côté avec le rapport trigonométrique cosinus:

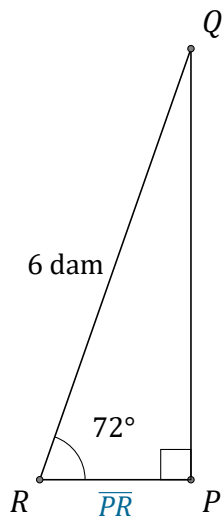
$$\cos(\alpha) = \frac{A}{H}$$



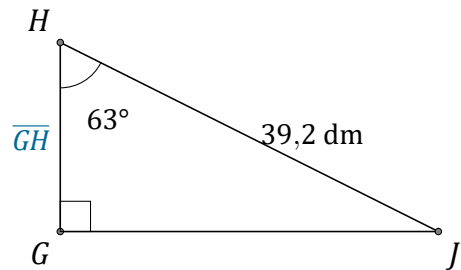
$$\overline{KM} = \underline{\hspace{2cm}}$$



$$\overline{AC} = \underline{\hspace{2cm}}$$



$$\overline{PR} = \underline{\hspace{2cm}}$$



$$\overline{GH} = \underline{\hspace{2cm}}$$

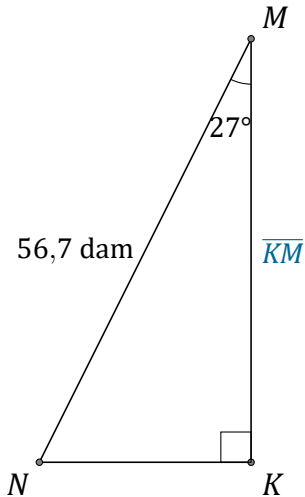
Rapport Trigonométrique Cos (C) Réponses

Nom: _____

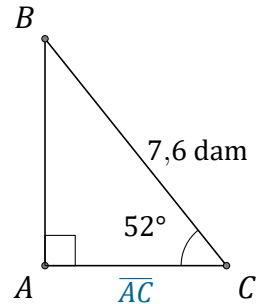
Date: _____

Trouvez la mesure d'un côté avec le rapport trigonométrique cosinus:

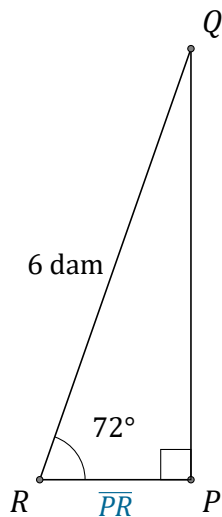
$$\cos(\alpha) = \frac{A}{H}$$



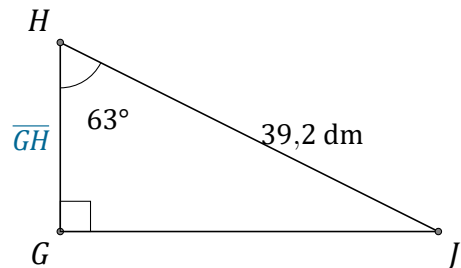
$$\overline{KM} = \underline{50,5 \text{ dam}}$$



$$\overline{AC} = \underline{4,7 \text{ dam}}$$



$$\overline{PR} = \underline{1,9 \text{ dam}}$$



$$\overline{GH} = \underline{17,8 \text{ dm}}$$