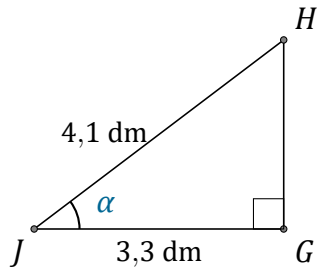


# Rapports Trigonométriques (B)

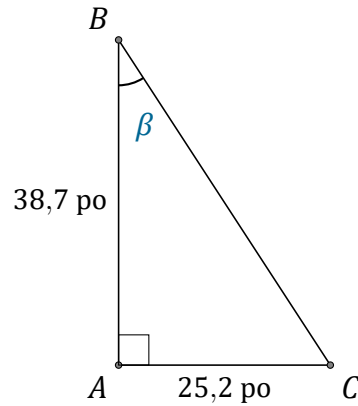
Nom: \_\_\_\_\_

Date: \_\_\_\_\_

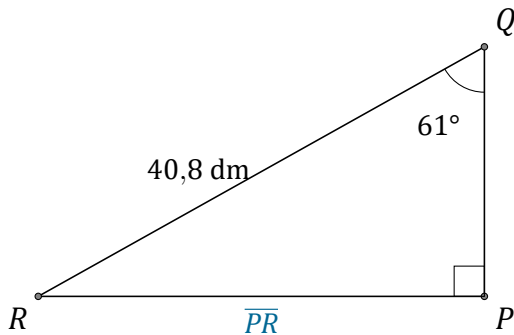
Trouvez la mesure d'un angle ou d'un côté avec les rapports trigonométriques.



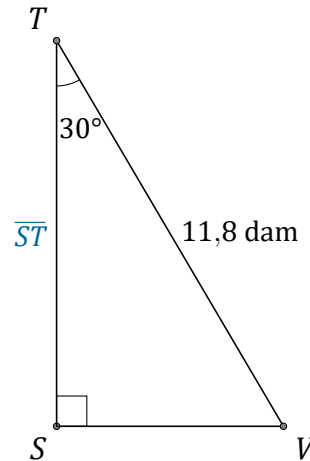
$$\alpha = \angle GJH = \underline{\hspace{2cm}}$$



$$\beta = \angle ABC = \underline{\hspace{2cm}}$$



$$\overline{PR} = \underline{\hspace{2cm}}$$



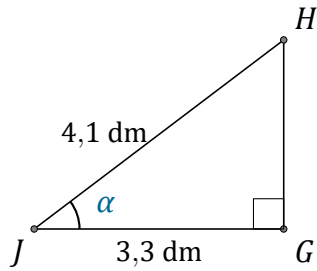
$$\overline{ST} = \underline{\hspace{2cm}}$$

# Rapports Trigonométriques (B) Réponses

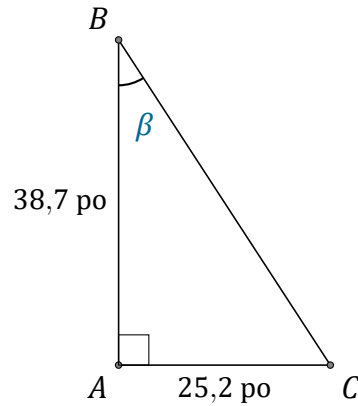
Nom: \_\_\_\_\_

Date: \_\_\_\_\_

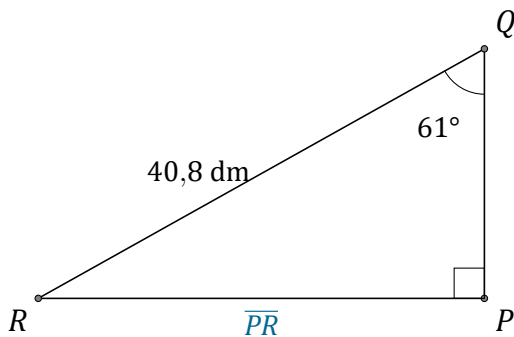
Trouvez la mesure d'un angle ou d'un côté avec les rapports trigonométriques.



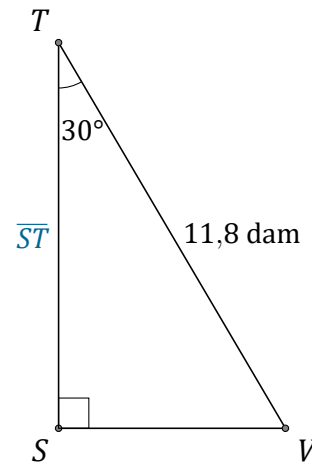
$$\alpha = \angle GJH = \underline{36,4^\circ}$$



$$\beta = \angle ABC = \underline{33,1^\circ}$$



$$\overline{PR} = \underline{35,7 \text{ dm}}$$



$$\overline{ST} = \underline{10,2 \text{ dam}}$$