

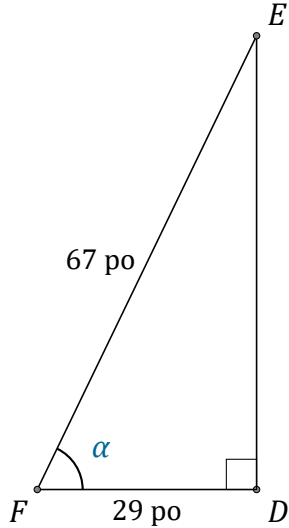
# Rapport Trigonométrique Cos (I)

Nom: \_\_\_\_\_

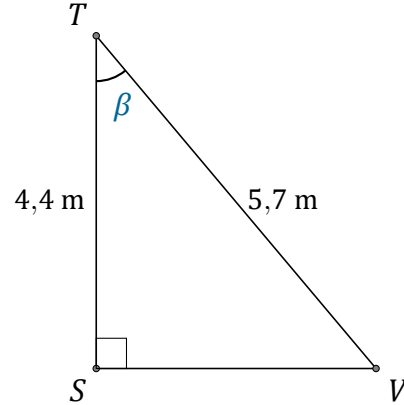
Date: \_\_\_\_\_

Trouvez la mesure d'un angle ou d'un côté avec le rapport trigonométrique

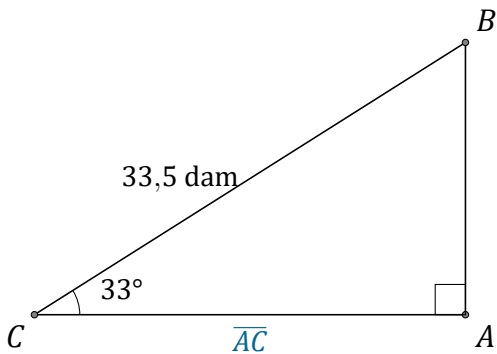
cosinus:  $\cos(\alpha) = \frac{A}{H}$



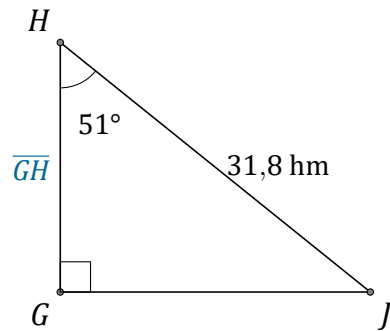
$\alpha = \angle DFE =$  \_\_\_\_\_



$\beta = \angle STV =$  \_\_\_\_\_



$\overline{AC} =$  \_\_\_\_\_



$\overline{GH} =$  \_\_\_\_\_