

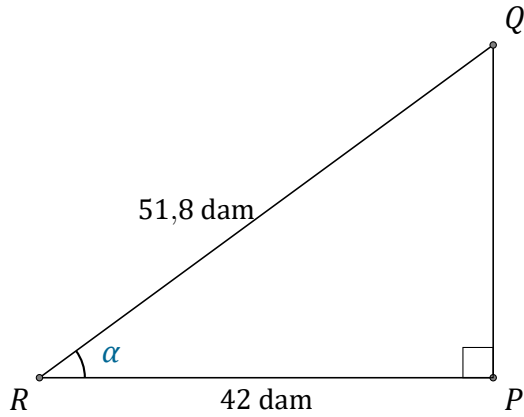
Rapport Trigonométrique Cos (G)

Nom: _____

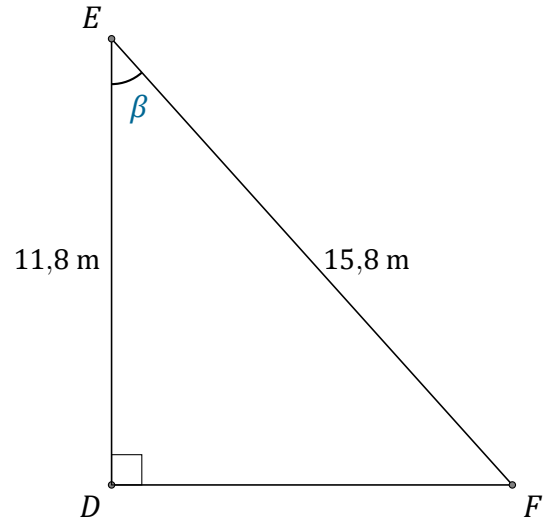
Date: _____

Trouvez la mesure d'un angle ou d'un côté avec le rapport trigonométrique

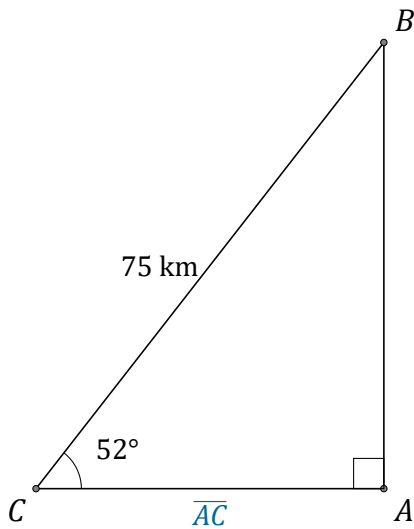
$$\text{cosinus: } \cos(\alpha) = \frac{A}{H}$$



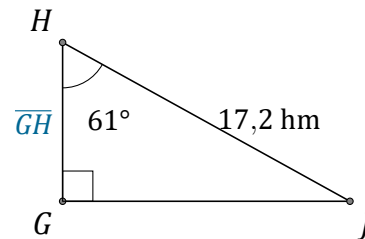
$$\alpha = \angle PRQ = \underline{\hspace{2cm}}$$



$$\beta = \angle DEF = \underline{\hspace{2cm}}$$



$$\overline{AC} = \underline{\hspace{2cm}}$$



$$\overline{GH} = \underline{\hspace{2cm}}$$