

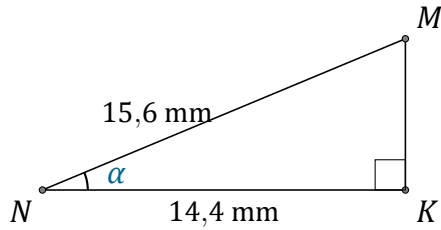
Rapport Trigonométrique Cos (F)

Nom: _____

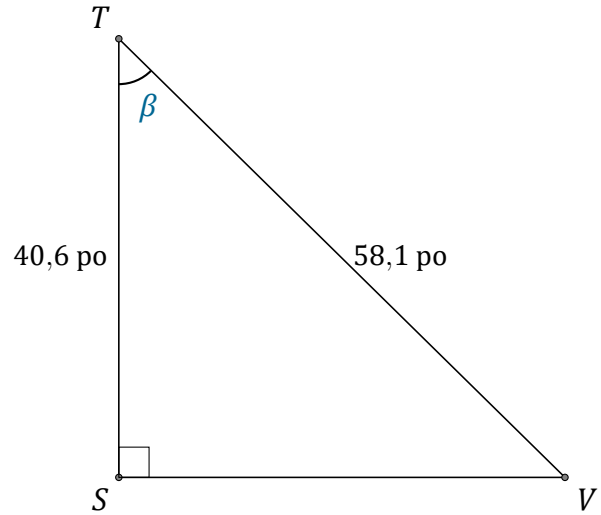
Date: _____

Trouvez la mesure d'un angle ou d'un côté avec le rapport trigonométrique

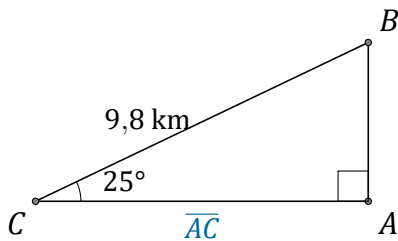
$$\text{cosinus: } \cos(\alpha) = \frac{A}{H}$$



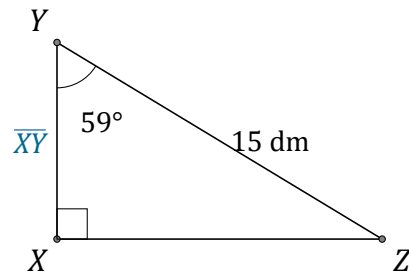
$$\alpha = \angle KNM = \underline{\hspace{2cm}}$$



$$\beta = \angle STV = \underline{\hspace{2cm}}$$



$$\overline{AC} = \underline{\hspace{2cm}}$$



$$\overline{XY} = \underline{\hspace{2cm}}$$

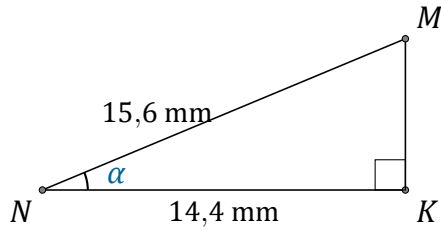
Rapport Trigonométrique Cos (F) Réponses

Nom: _____

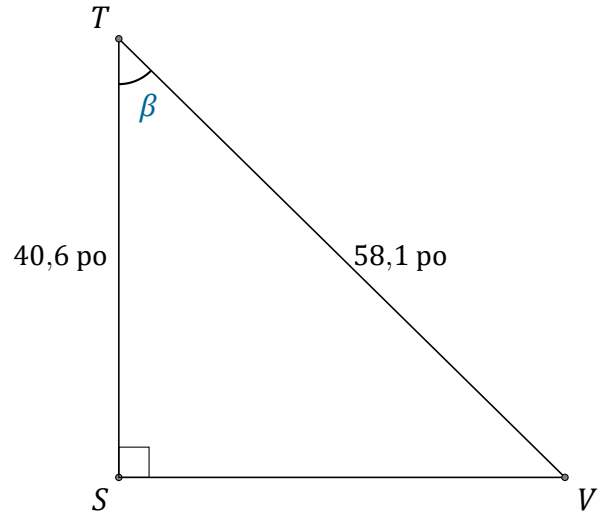
Date: _____

Trouvez la mesure d'un angle ou d'un côté avec le rapport trigonométrique

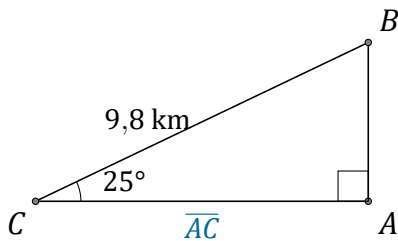
$$\text{cosinus: } \cos(\alpha) = \frac{A}{H}$$



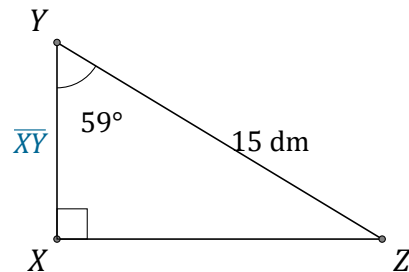
$$\alpha = \angle KNM = \underline{22,6^\circ}$$



$$\beta = \angle STV = \underline{45,7^\circ}$$



$$\overline{AC} = \underline{8,9 \text{ km}}$$



$$\overline{XY} = \underline{7,7 \text{ dm}}$$