

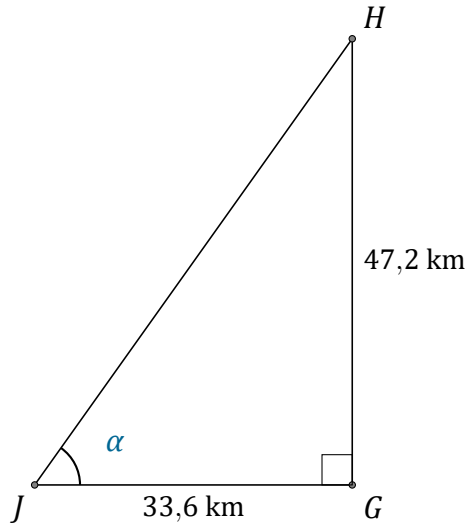
# Rapport Trigonométrique Tan (J)

Nom: \_\_\_\_\_

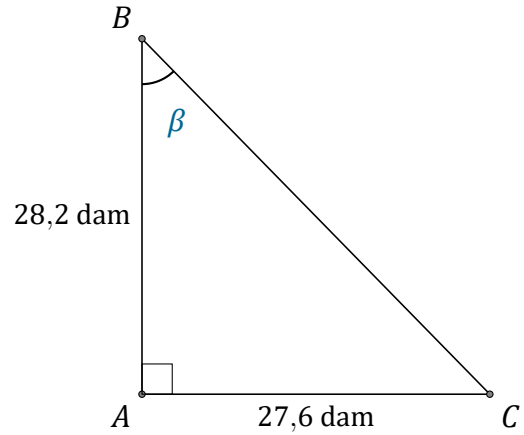
Date: \_\_\_\_\_

Trouvez la mesure d'un angle avec le rapport trigonométrique tangente:

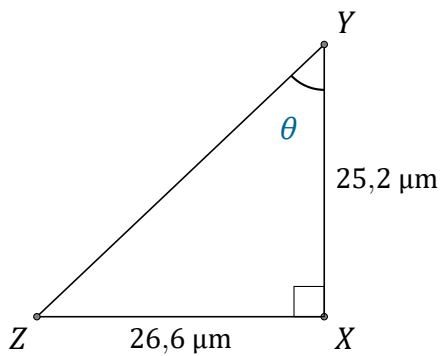
$$\tan(\alpha) = \frac{O}{A}$$



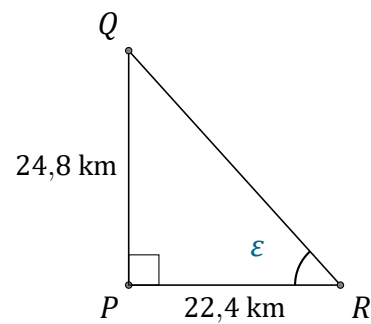
$$\alpha = \angle GJH = \underline{\hspace{2cm}}$$



$$\beta = \angle ABC = \underline{\hspace{2cm}}$$



$$\theta = \angle XYZ = \underline{\hspace{2cm}}$$



$$\epsilon = \angle PRQ = \underline{\hspace{2cm}}$$