

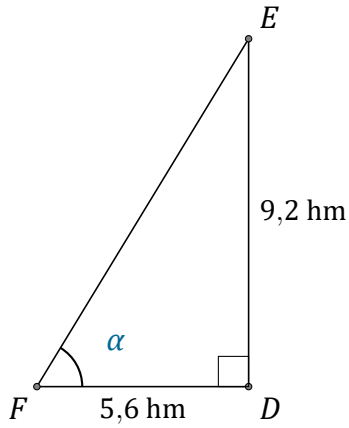
Rapport Trigonométrique Tan (G)

Nom: _____

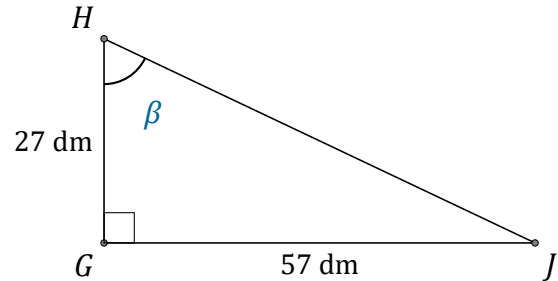
Date: _____

Trouvez la mesure d'un angle avec le rapport trigonométrique tangente:

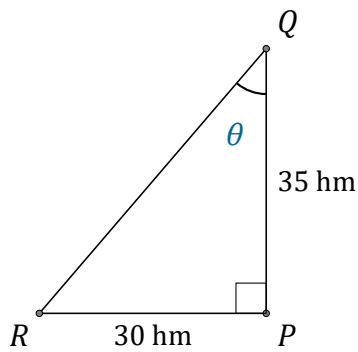
$$\tan(\alpha) = \frac{O}{A}$$



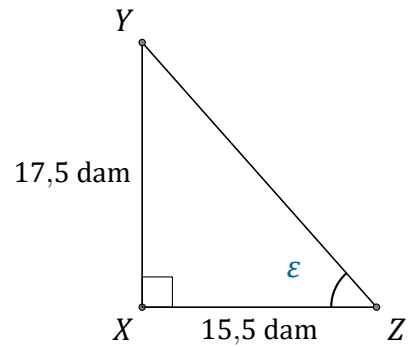
$$\alpha = \angle DFE = \underline{\hspace{2cm}}$$



$$\beta = \angle GHJ = \underline{\hspace{2cm}}$$



$$\theta = \angle PQR = \underline{\hspace{2cm}}$$



$$\epsilon = \angle XZY = \underline{\hspace{2cm}}$$