

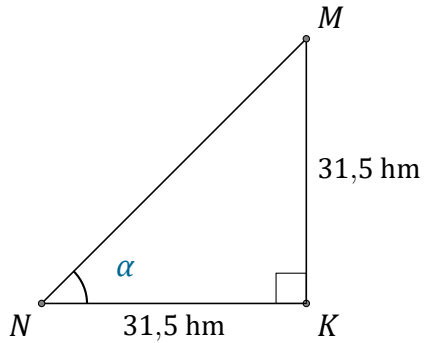
Rapport Trigonométrique Tan (B)

Nom: _____

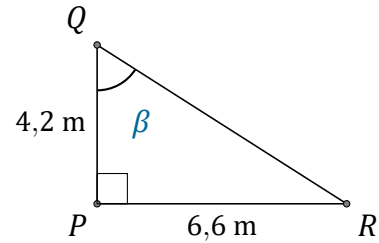
Date: _____

Trouvez la mesure d'un angle avec le rapport trigonométrique tangente:

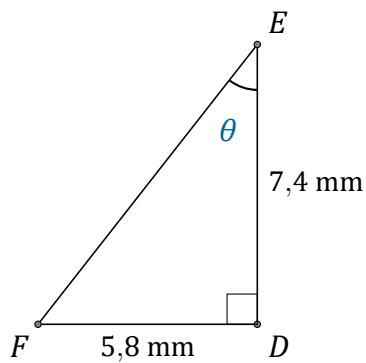
$$\tan(\alpha) = \frac{O}{A}$$



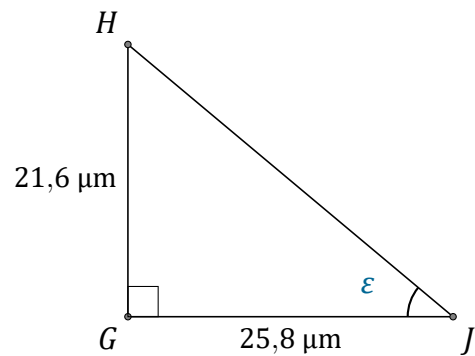
$$\alpha = \angle KNM = \underline{\hspace{2cm}}$$



$$\beta = \angle PQR = \underline{\hspace{2cm}}$$



$$\theta = \angle DEF = \underline{\hspace{2cm}}$$



$$\epsilon = \angle GJH = \underline{\hspace{2cm}}$$