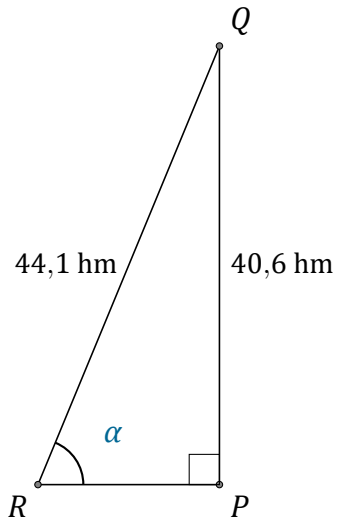


Rapport Trigonométrique Sin (C)

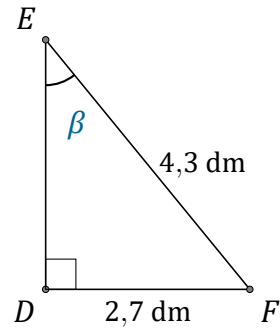
Nom: _____

Date: _____

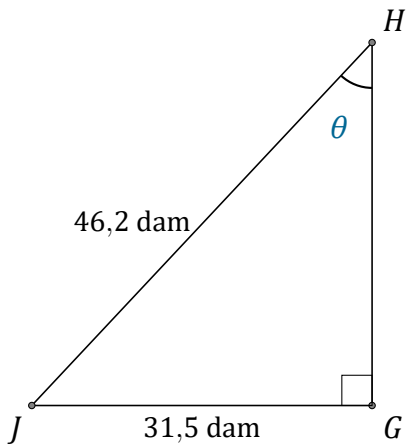
Trouvez la mesure d'un angle avec le rapport trigonométrique sinus: $\sin(\alpha) = \frac{O}{H}$



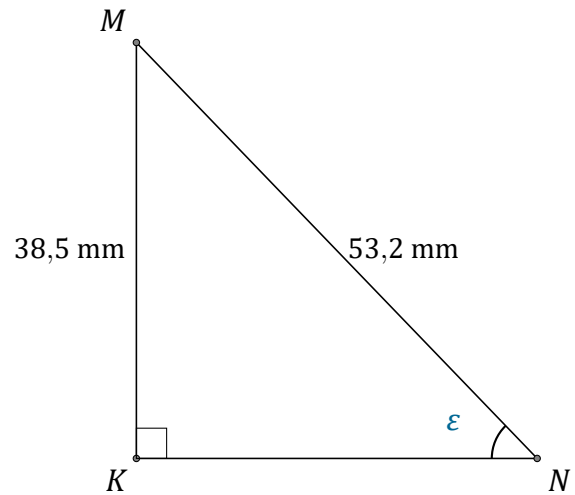
$$\alpha = \angle PRQ = \underline{\hspace{2cm}}$$



$$\beta = \angle DEF = \underline{\hspace{2cm}}$$



$$\theta = \angle GHJ = \underline{\hspace{2cm}}$$



$$\epsilon = \angle KNM = \underline{\hspace{2cm}}$$