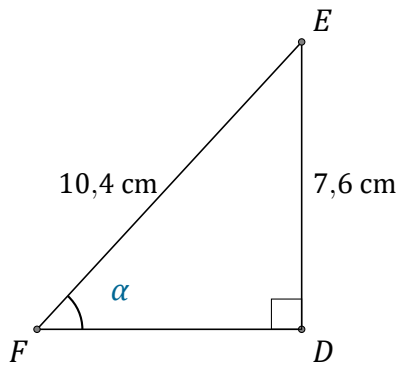


# Rapports Trigonométriques (F)

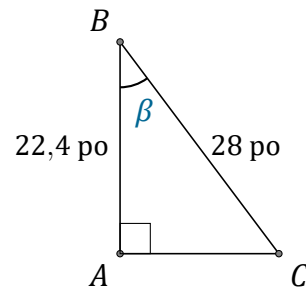
Nom: \_\_\_\_\_

Date: \_\_\_\_\_

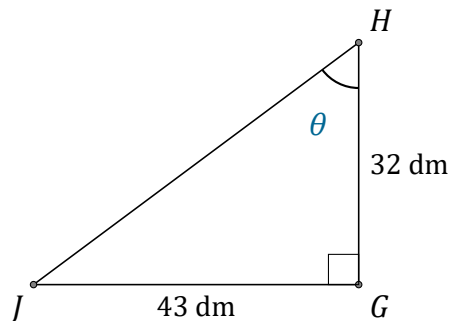
Trouvez la mesure d'un angle avec les rapports trigonométriques



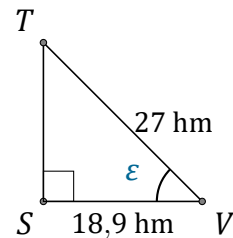
$$\alpha = \angle DFE = \underline{\hspace{2cm}}$$



$$\beta = \angle ABC = \underline{\hspace{2cm}}$$



$$\theta = \angle GHJ = \underline{\hspace{2cm}}$$



$$\epsilon = \angle SVT = \underline{\hspace{2cm}}$$