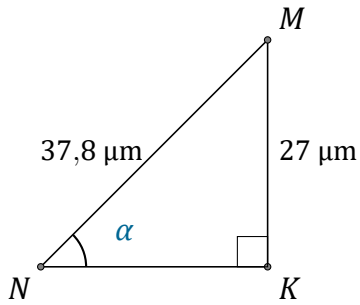


Rapports Trigonométriques (D)

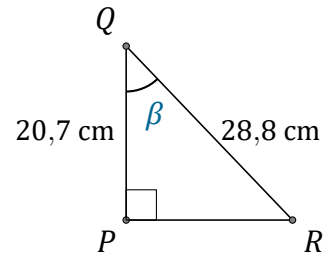
Nom: _____

Date: _____

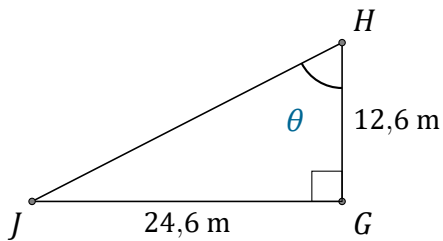
Trouvez la mesure d'un angle avec les rapports trigonométriques



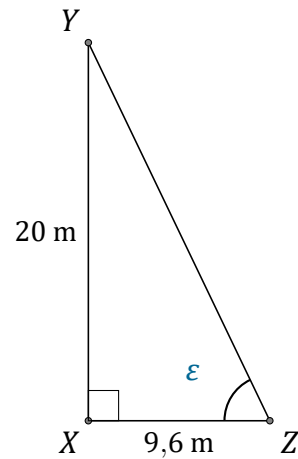
$$\alpha = \angle KNM = \underline{\hspace{2cm}}$$



$$\beta = \angle PQR = \underline{\hspace{2cm}}$$



$$\theta = \angle GHJ = \underline{\hspace{2cm}}$$



$$\epsilon = \angle XZY = \underline{\hspace{2cm}}$$