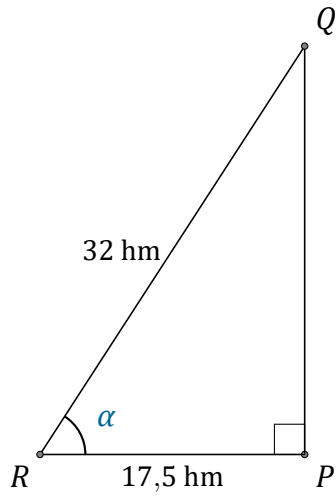


Rapports Trigonométriques (C)

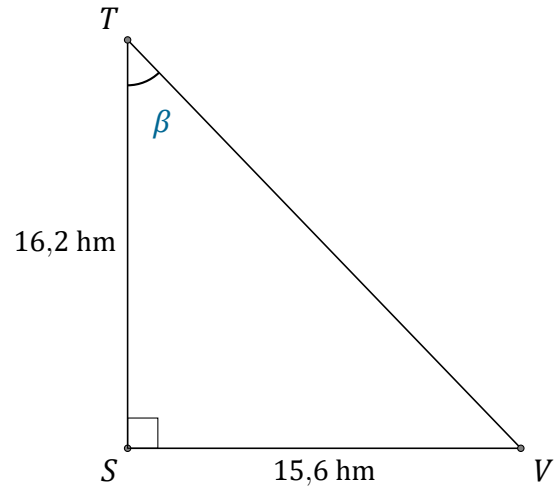
Nom: _____

Date: _____

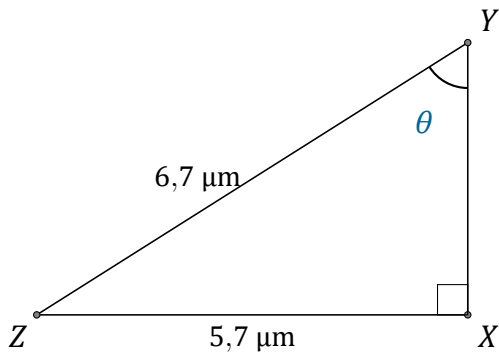
Trouvez la mesure d'un angle avec les rapports trigonométriques



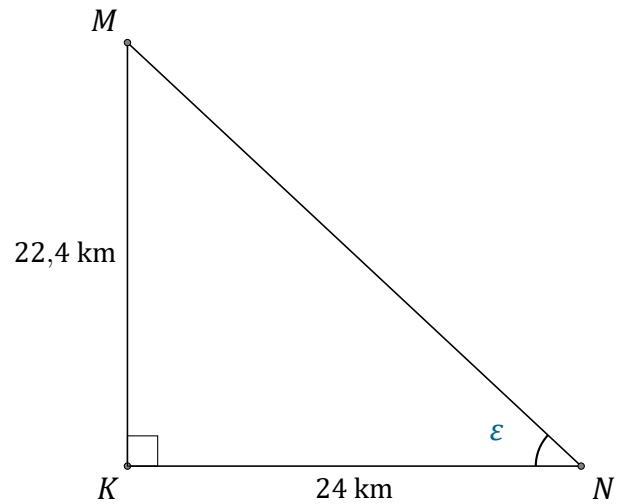
$$\alpha = \angle PRQ = \underline{\hspace{2cm}}$$



$$\beta = \angle STV = \underline{\hspace{2cm}}$$



$$\theta = \angle XYZ = \underline{\hspace{2cm}}$$



$$\epsilon = \angle KNM = \underline{\hspace{2cm}}$$