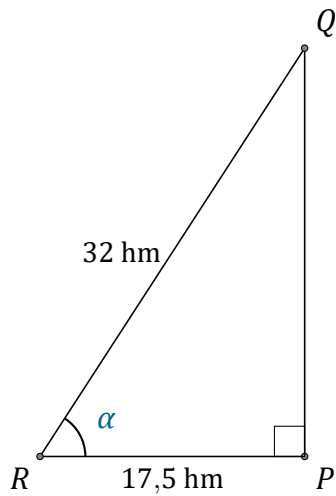


Rapports Trigonométriques (C)

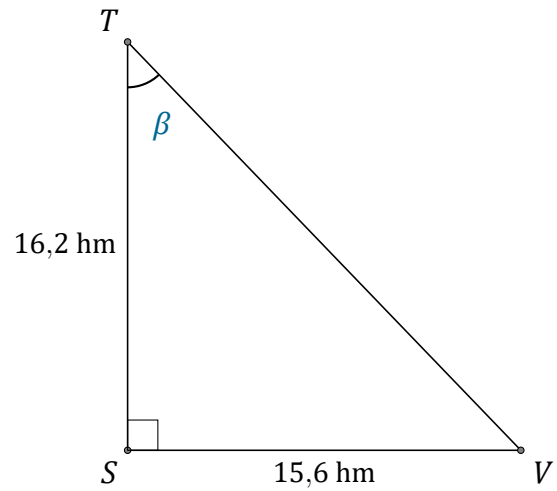
Nom: _____

Date: _____

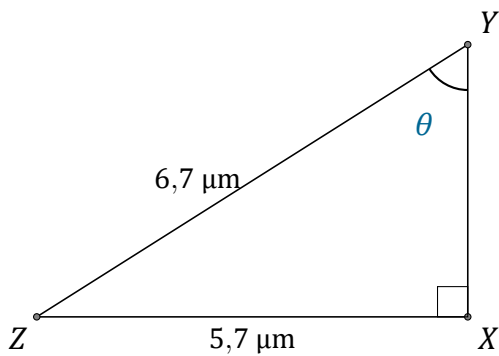
Trouvez la mesure d'un angle avec les rapports trigonométriques



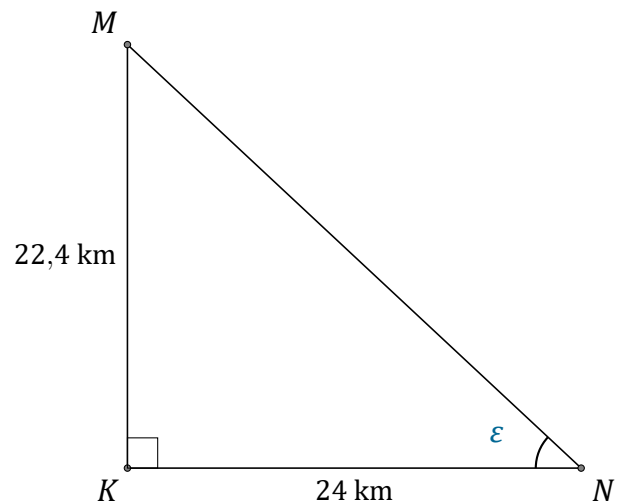
$$\alpha = \angle PRQ = \underline{\hspace{2cm}}$$



$$\beta = \angle STV = \underline{\hspace{2cm}}$$



$$\theta = \angle XYZ = \underline{\hspace{2cm}}$$



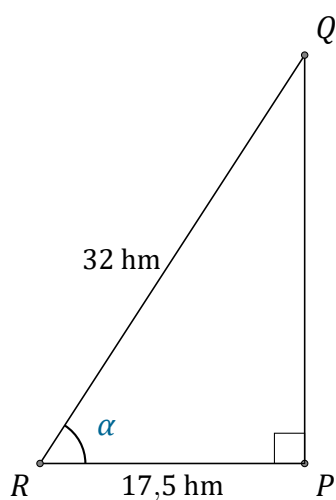
$$\epsilon = \angle KNM = \underline{\hspace{2cm}}$$

Rapports Trigonométriques (C) Réponses

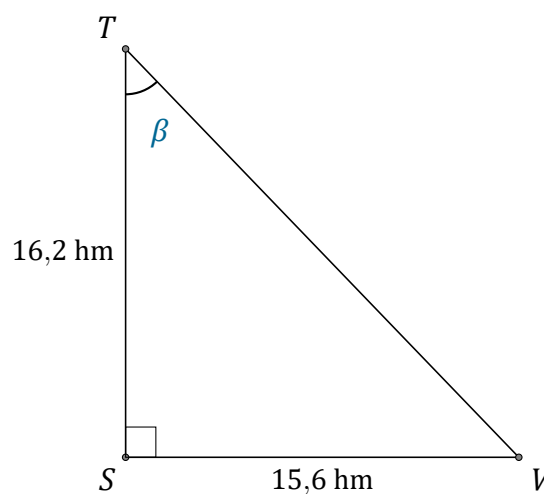
Nom: _____

Date: _____

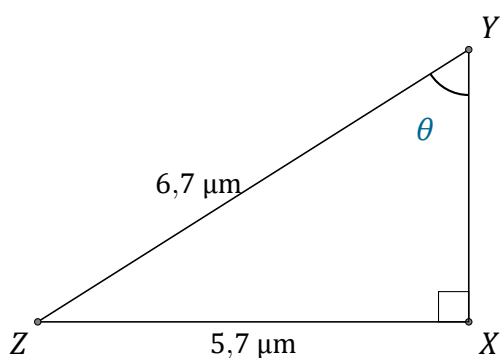
Trouvez la mesure d'un angle avec les rapports trigonométriques



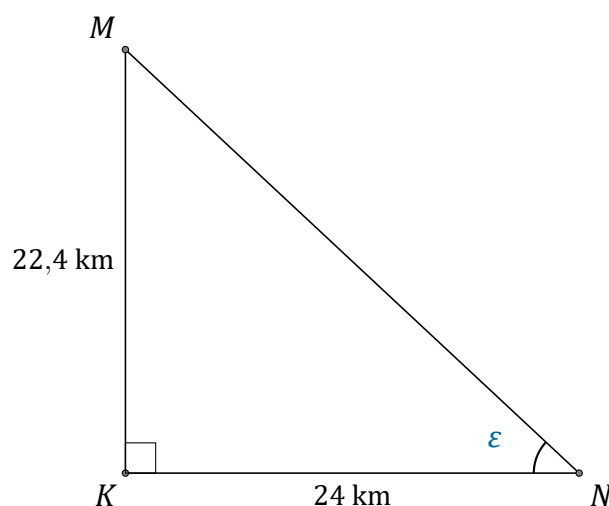
$$\alpha = \angle PRQ = \underline{56,8^\circ}$$



$$\beta = \angle STV = \underline{43,9^\circ}$$



$$\theta = \angle XYZ = \underline{58,3^\circ}$$



$$\epsilon = \angle KNM = \underline{43^\circ}$$