

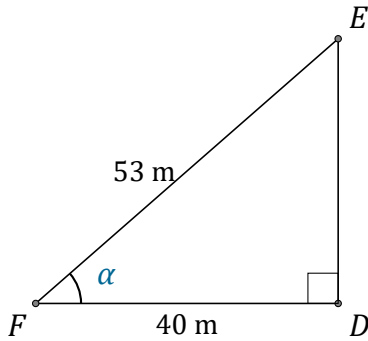
Rapport Trigonométrique Cos (A)

Nom: _____

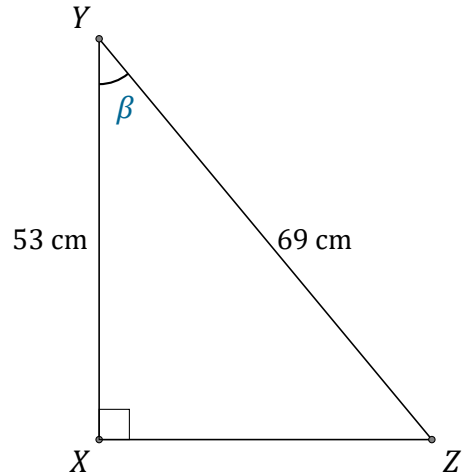
Date: _____

Trouvez la mesure d'un angle avec le rapport trigonométrique cosinus:

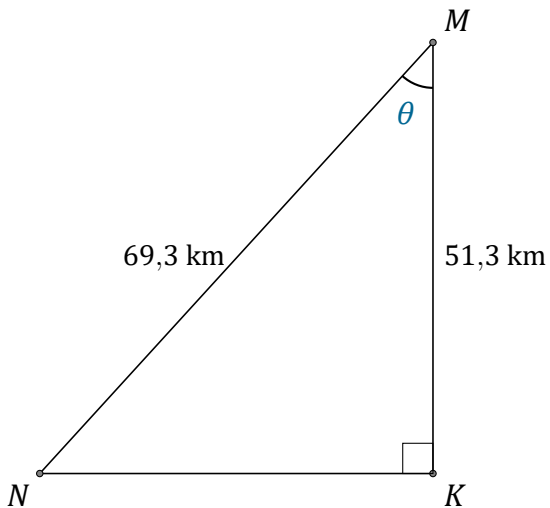
$$\cos(\alpha) = \frac{A}{H}$$



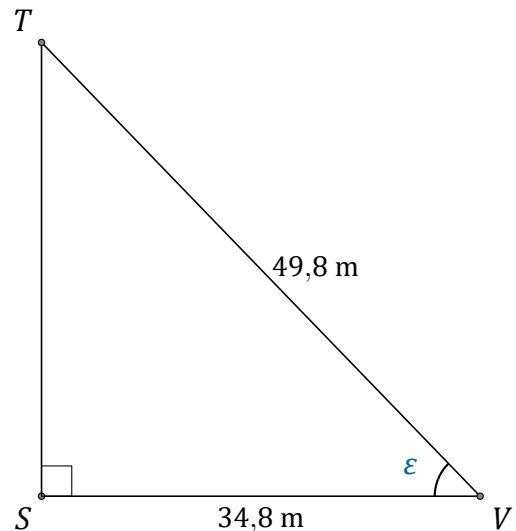
$$\alpha = \angle DFE = \underline{\hspace{2cm}}$$



$$\beta = \angle XYZ = \underline{\hspace{2cm}}$$



$$\theta = \angle KMN = \underline{\hspace{2cm}}$$



$$\epsilon = \angle SVT = \underline{\hspace{2cm}}$$