



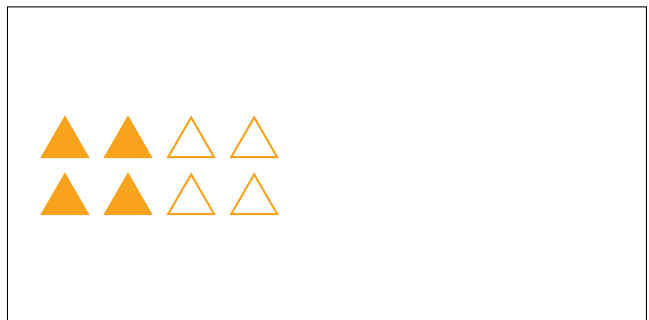
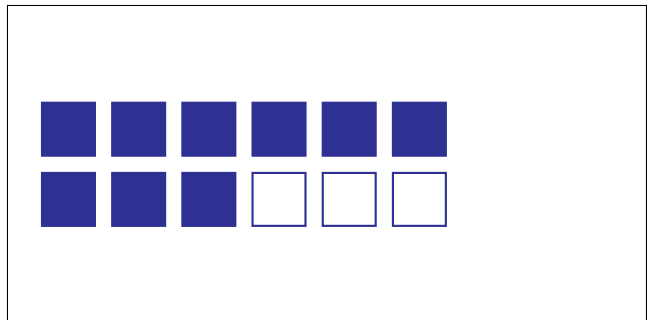
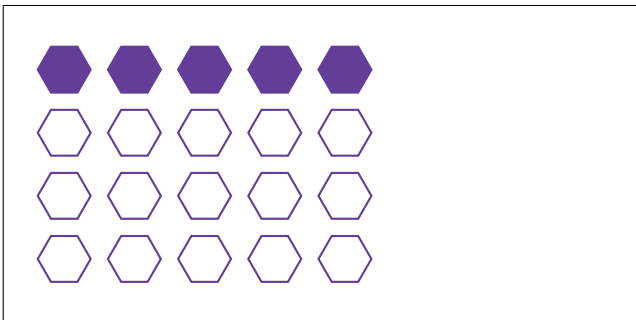
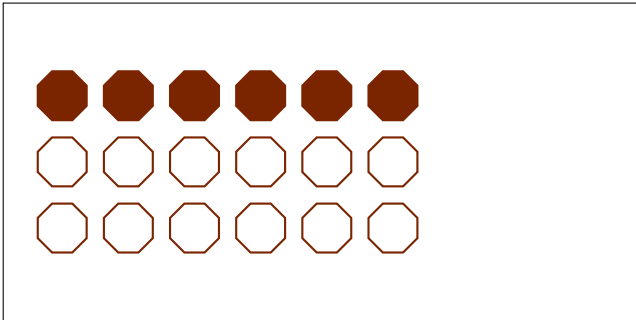
# Modèles d'un Ensemble (E)




Dans cet ensemble  
il y a 12 figures  
et 3 sont coloriées.

$$\frac{3 \text{ figures coloriées}}{12 \text{ figures dans cet ensemble}} = \frac{3}{12} = \frac{1}{4}$$

Écrivez une fraction pour chacun des modèles suivants.



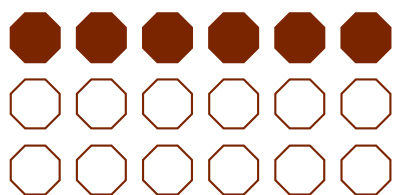
# Modèles d'un Ensemble (E) Réponses




Dans cet ensemble  
il y a 12 figures  
et 3 sont coloriées.

$$\frac{3 \text{ figures coloriées}}{12 \text{ figures dans cet ensemble}} = \frac{3}{12} = \frac{1}{4}$$


Écrivez une fraction pour chacun des modèles suivants.



$$\frac{6}{18} = \frac{1}{3}$$



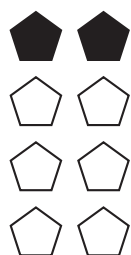
$$\frac{6}{9} = \frac{2}{3}$$



$$\frac{5}{20} = \frac{1}{4}$$




$$\frac{9}{12} = \frac{3}{4}$$



$$\frac{2}{8} = \frac{1}{4}$$



$$\frac{4}{8} = \frac{1}{2}$$



$$\frac{2}{4} = \frac{1}{2}$$



$$\frac{8}{24} = \frac{1}{3}$$