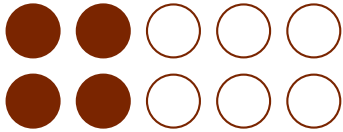





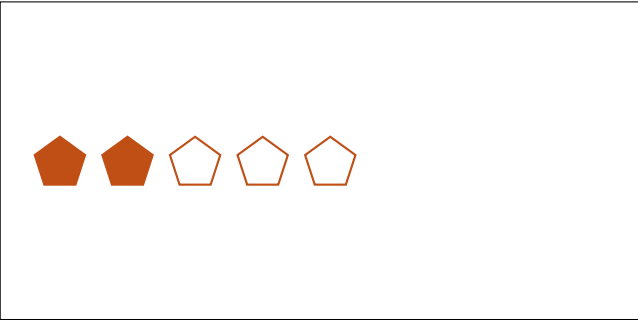




# Modèles d'un Ensemble (G)




Dans cet ensemble  
il y a 10 figures  
et 4 sont coloriées.

$$\frac{4 \text{ figures coloriées}}{10 \text{ figures dans cet ensemble}} = \frac{4}{10} = \frac{2}{5}$$

Écrivez une fraction pour chacun des modèles suivants.




# Modèles d'un Ensemble (G) Réponses




Dans cet ensemble  
il y a 10 figures  
et 4 sont coloriées.

$$\frac{4 \text{ figures coloriées}}{10 \text{ figures dans cet ensemble}} = \frac{4}{10} = \frac{2}{5}$$


Écrivez une fraction pour chacun des modèles suivants.




$$\frac{12}{16} = \frac{3}{4}$$



$$\frac{12}{18} = \frac{2}{3}$$




$$\frac{12}{24} = \frac{1}{2}$$



$$\frac{12}{15} = \frac{4}{5}$$




$$\frac{2}{5}$$



$$\frac{6}{18} = \frac{1}{3}$$



$$\frac{1}{5}$$



$$\frac{9}{15} = \frac{3}{5}$$