



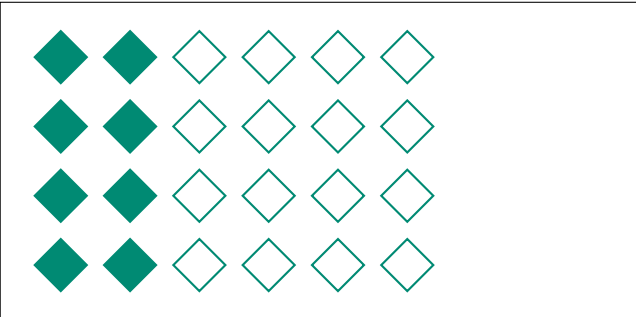

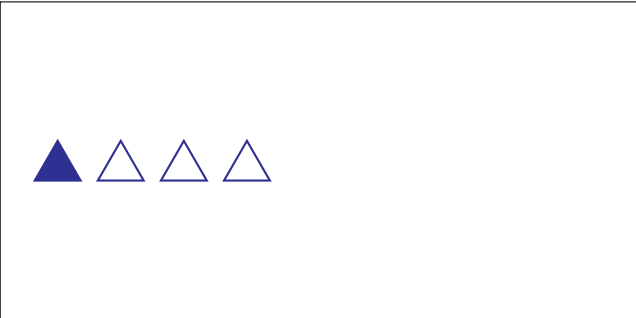


Modèles d'un Ensemble (G)




Dans cet ensemble
il y a 24 figures et
12 sont coloriées.

$$\frac{12 \text{ figures coloriées}}{24 \text{ figures dans cet ensemble}} = \frac{12}{24} = \frac{1}{2}$$

Écrivez une fraction pour chacun des modèles suivants.



Modèles d'un Ensemble (G) Réponses



Dans cet ensemble
il y a 24 figures et
12 sont coloriées.

$$\frac{12 \text{ figures coloriées}}{24 \text{ figures dans cet ensemble}} = \frac{12}{24} = \frac{1}{2}$$


Écrivez une fraction pour chacun des modèles suivants.




$$\frac{9}{18} = \frac{1}{2}$$



$$\frac{2}{3}$$




$$\frac{9}{15} = \frac{3}{5}$$




$$\frac{15}{18} = \frac{5}{6}$$




$$\frac{1}{4}$$



$$\frac{3}{18} = \frac{1}{6}$$



$$\frac{8}{24} = \frac{1}{3}$$



$$\frac{2}{10} = \frac{1}{5}$$