


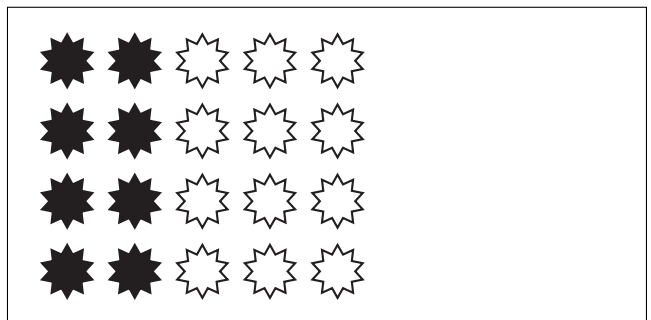
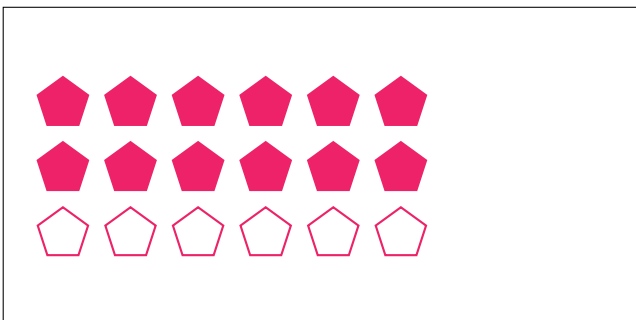

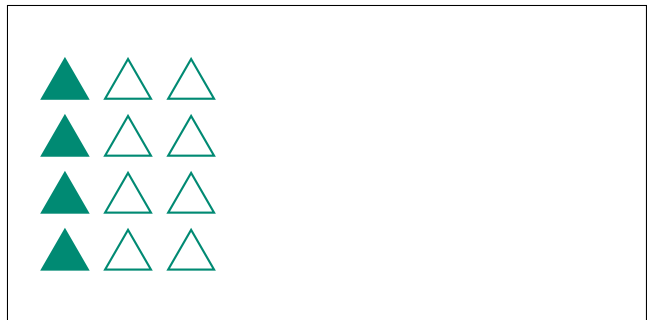
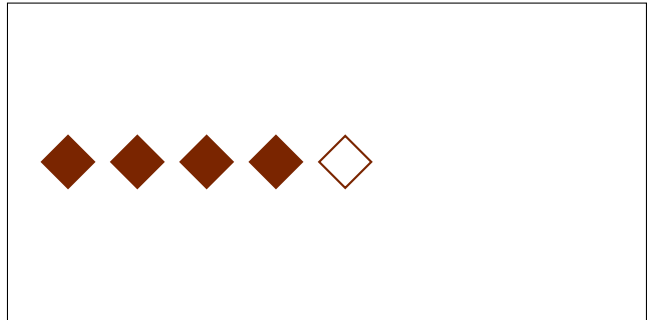
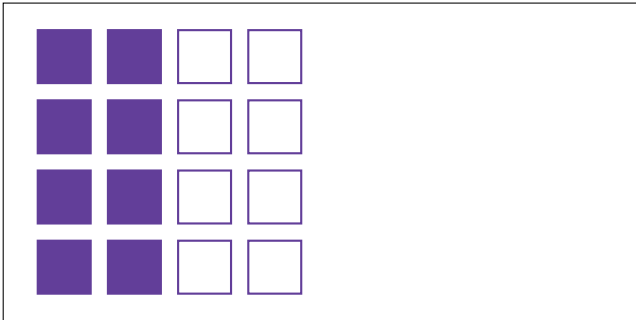
# Modèles d'un Ensemble (E)




Dans cet ensemble  
il y a 24 figures et  
20 sont coloriées.

$$\frac{20 \text{ figures coloriées}}{24 \text{ figures dans cet ensemble}} = \frac{20}{24} = \frac{5}{6}$$

Écrivez une fraction pour chacun des modèles suivants.




# Modèles d'un Ensemble (E) Réponses



Dans cet ensemble  
il y a 24 figures et  
20 sont coloriées.

$$\frac{20 \text{ figures coloriées}}{24 \text{ figures dans cet ensemble}} = \frac{20}{24} = \frac{5}{6}$$

Écrivez une fraction pour chacun des modèles suivants.




$$\frac{8}{16} = \frac{1}{2}$$



$$\frac{4}{5}$$



$$\frac{3}{8}$$




$$\frac{4}{12} = \frac{1}{3}$$




$$\frac{1}{4}$$



$$\frac{5}{6}$$



$$\frac{12}{18} = \frac{2}{3}$$



$$\frac{8}{20} = \frac{2}{5}$$