



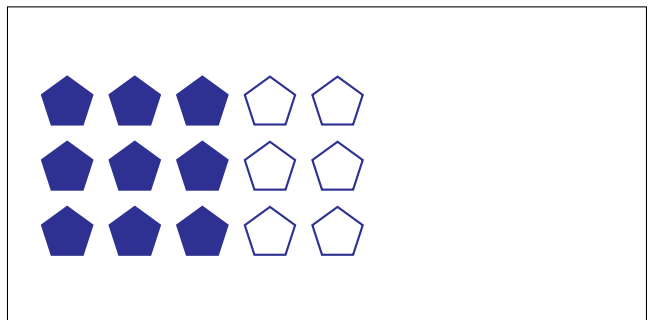

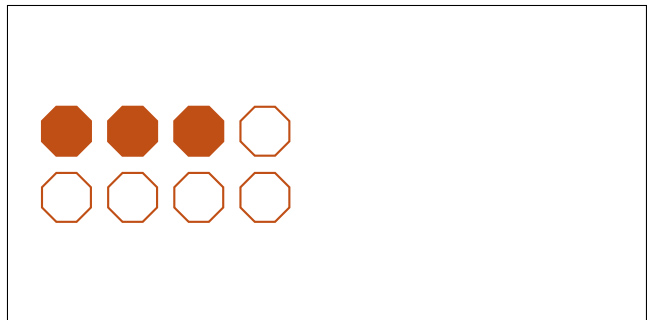

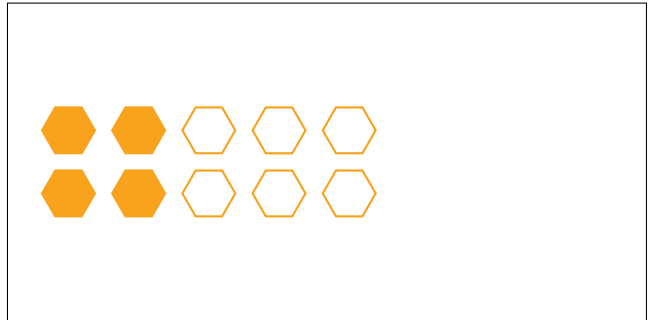

Modèles d'un Ensemble (D)




Dans cet ensemble
il y a 18 figures et
12 sont coloriées.

$$\frac{12 \text{ figures coloriées}}{18 \text{ figures dans cet ensemble}} = \frac{12}{18} = \frac{2}{3}$$

Écrivez une fraction pour chacun des modèles suivants.



Modèles d'un Ensemble (D) Réponses



Dans cet ensemble
il y a 18 figures et
12 sont coloriées.

$$\frac{12 \text{ figures coloriées}}{18 \text{ figures dans cet ensemble}} = \frac{12}{18} = \frac{2}{3}$$


Écrivez une fraction pour chacun des modèles suivants.



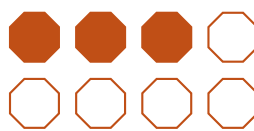
$$\frac{5}{6}$$




$$\frac{4}{10} = \frac{2}{5}$$



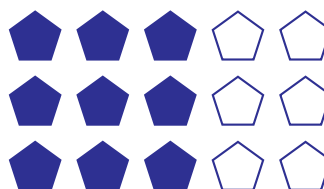
$$\frac{10}{15} = \frac{2}{3}$$



$$\frac{3}{8}$$




$$\frac{12}{24} = \frac{1}{2}$$



$$\frac{9}{15} = \frac{3}{5}$$



$$\frac{5}{15} = \frac{1}{3}$$



$$\frac{9}{12} = \frac{3}{4}$$