




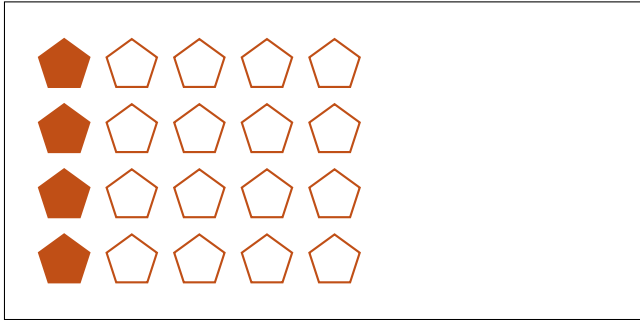
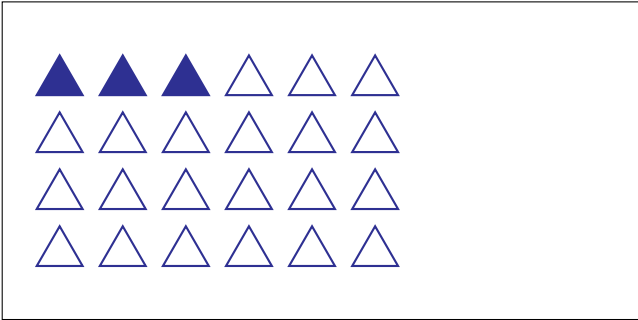




Modèles d'un Ensemble (A)




Dans cet ensemble
il y a 20 figures
et 5 sont coloriées.

$$\frac{5 \text{ figures coloriées}}{20 \text{ figures dans cet ensemble}} = \frac{5}{20} = \frac{1}{4}$$

Écrivez une fraction pour chacun des modèles suivants.




Modèles d'un Ensemble (A) Réponses




Dans cet ensemble
il y a 20 figures
et 5 sont coloriées.

$$\frac{5 \text{ figures coloriées}}{20 \text{ figures dans cet ensemble}} = \frac{5}{20} = \frac{1}{4}$$

Écrivez une fraction pour chacun des modèles suivants.




$$\frac{5}{20} = \frac{1}{4}$$




$$\frac{16}{20} = \frac{4}{5}$$




$$\frac{20}{24} = \frac{5}{6}$$



$$\frac{12}{18} = \frac{2}{3}$$



$$\frac{3}{24} = \frac{1}{8}$$



$$\frac{4}{20} = \frac{1}{5}$$



$$\frac{4}{12} = \frac{1}{3}$$



$$\frac{6}{12} = \frac{1}{2}$$