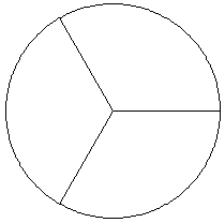


Modèles de Fractions (G)

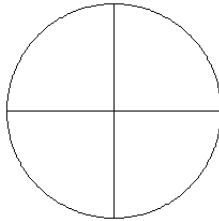
Pour chaque modèle, colorez la portion du cercle représentée par la fraction associée.

1.



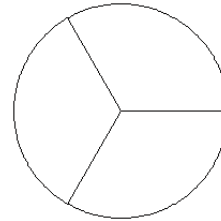
$\frac{2}{3}$

2.



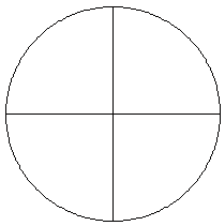
$\frac{2}{4}$

3.



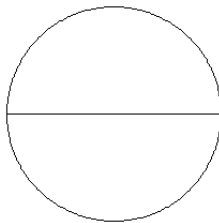
$\frac{0}{3}$

4.



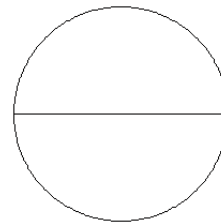
$\frac{0}{4}$

5.



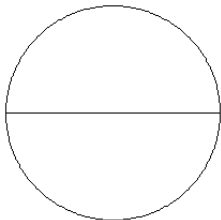
$\frac{1}{2}$

6.



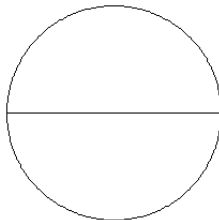
$\frac{1}{2}$

7.



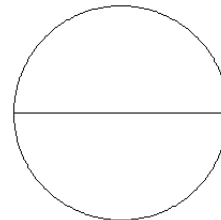
$\frac{0}{2}$

8.



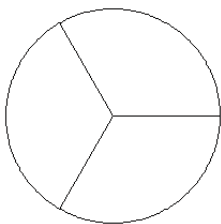
$\frac{2}{2}$

9.



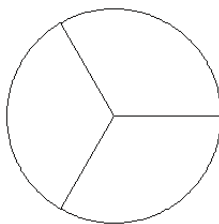
$\frac{0}{2}$

10.



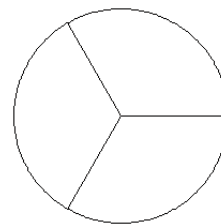
$\frac{2}{3}$

11.



$\frac{2}{3}$

12.



$\frac{0}{3}$