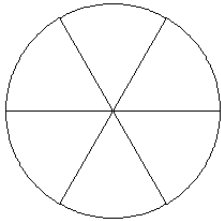


Modèles de Fractions (C)

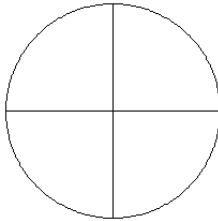
Pour chaque modèle, colorez la portion du cercle représentée par la fraction associée.

1.



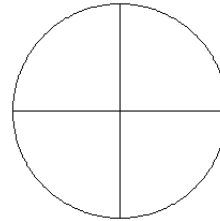
$\frac{5}{6}$

2.



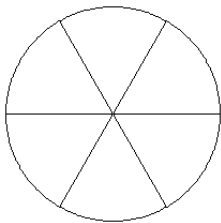
$\frac{1}{4}$

3.



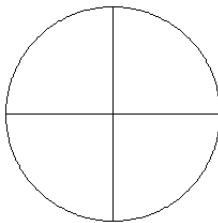
$\frac{0}{4}$

4.



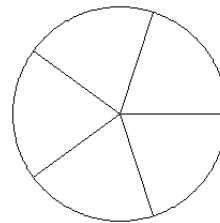
$\frac{5}{6}$

5.



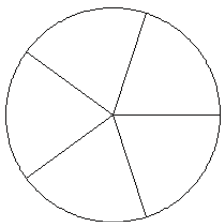
$\frac{3}{4}$

6.



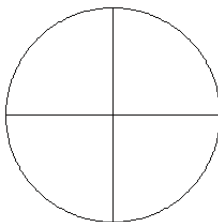
$\frac{3}{5}$

7.



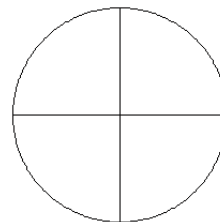
$\frac{4}{5}$

8.



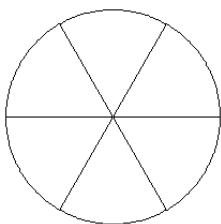
$\frac{3}{4}$

9.



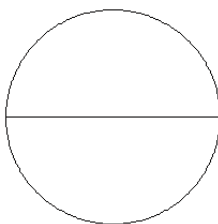
$\frac{1}{4}$

10.



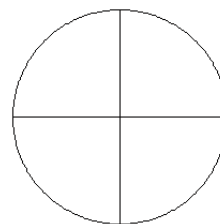
$\frac{2}{6}$

11.



$\frac{1}{2}$

12.



$\frac{2}{4}$