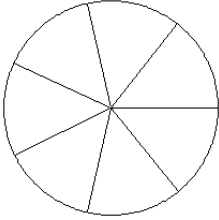


Modèles de Fractions (F)

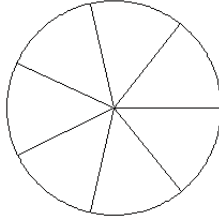
Pour chaque modèle, colorez la portion du cercle représentée par la fraction associée.

1.



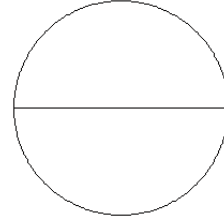
$$\frac{3}{7}$$

2.



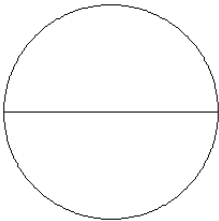
$$\frac{3}{7}$$

3.



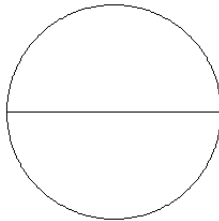
$$\frac{0}{2}$$

4.



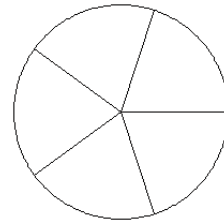
$$\frac{2}{2}$$

5.



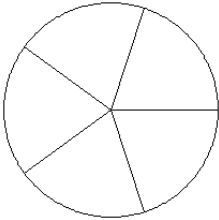
$$\frac{0}{2}$$

6.



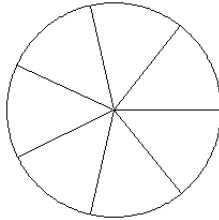
$$\frac{4}{5}$$

7.



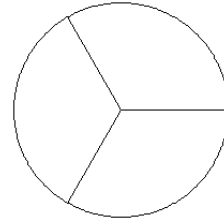
$$\frac{2}{5}$$

8.



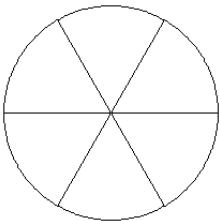
$$\frac{3}{7}$$

9.



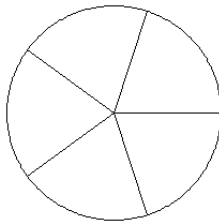
$$\frac{1}{3}$$

10.



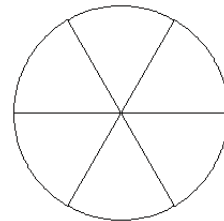
$$\frac{3}{6}$$

11.



$$\frac{4}{5}$$

12.

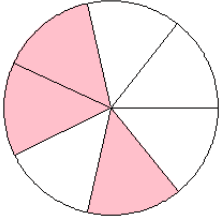


$$\frac{3}{6}$$

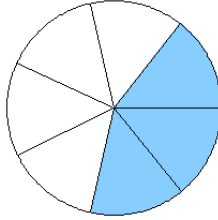
Modèles de Fractions (F) Solutions

Pour chaque modèle, colorez la portion du cercle représentée par la fraction associée.

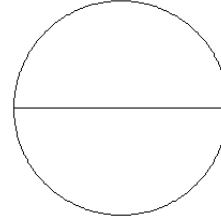
1.



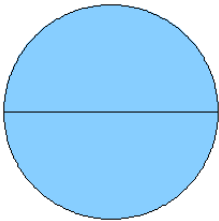
2.



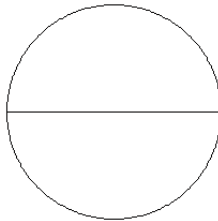
3.



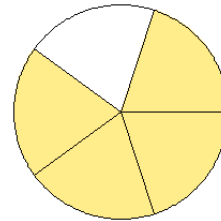
4.



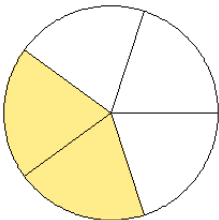
5.



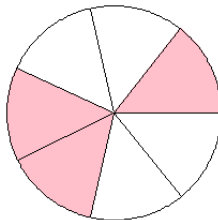
6.



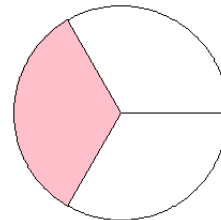
7.



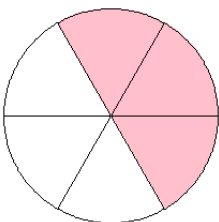
8.



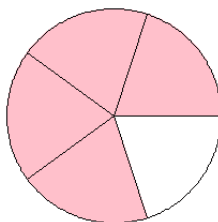
9.



10.



11.



12.

