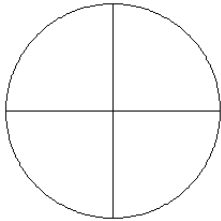


Modèles de Fractions (D)

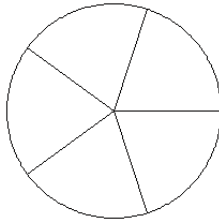
Pour chaque modèle, colorez la portion du cercle représentée par la fraction associée.

1.



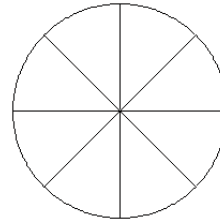
$$\frac{1}{4}$$

2.



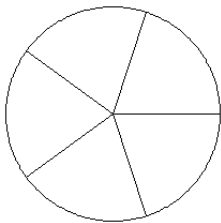
$$\frac{3}{5}$$

3.



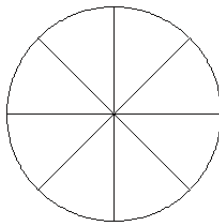
$$\frac{1}{8}$$

4.



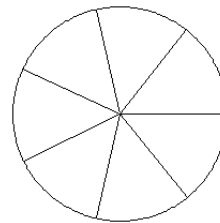
$$\frac{3}{5}$$

5.



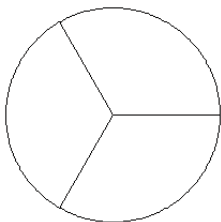
$$\frac{5}{8}$$

6.



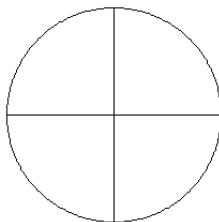
$$\frac{3}{7}$$

7.



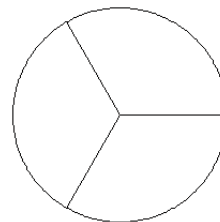
$$\frac{1}{3}$$

8.



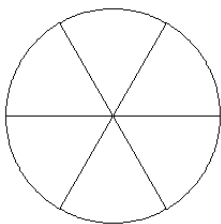
$$\frac{1}{4}$$

9.



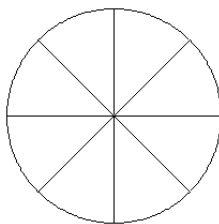
$$\frac{2}{3}$$

10.



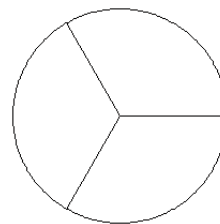
$$\frac{6}{6}$$

11.



$$\frac{3}{8}$$

12.



$$\frac{2}{3}$$