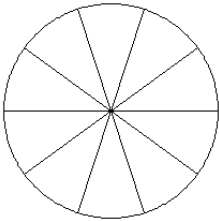


Modèles de Fractions (I)

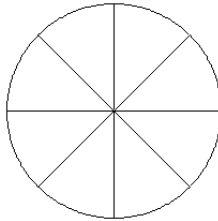
Pour chaque modèle, colorez la portion du cercle représentée par la fraction associée.

1.



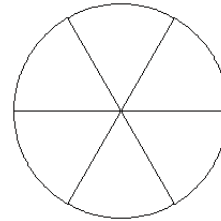
$$\frac{5}{10}$$

2.



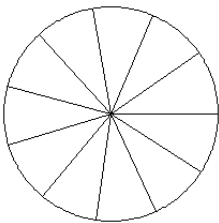
$$\frac{4}{8}$$

3.



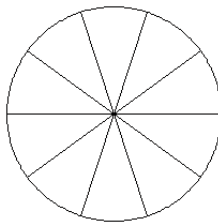
$$\frac{5}{6}$$

4.



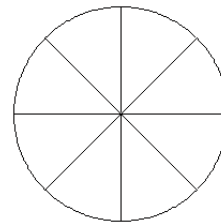
$$\frac{6}{11}$$

5.



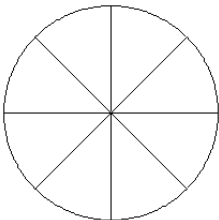
$$\frac{5}{10}$$

6.



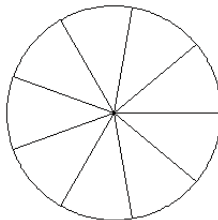
$$\frac{3}{8}$$

7.



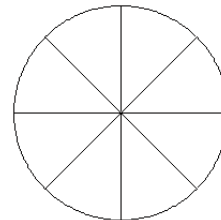
$$\frac{3}{8}$$

8.



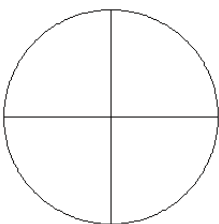
$$\frac{6}{9}$$

9.



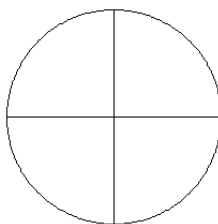
$$\frac{4}{8}$$

10.



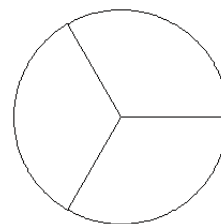
$$\frac{1}{4}$$

11.



$$\frac{2}{4}$$

12.



$$\frac{2}{3}$$