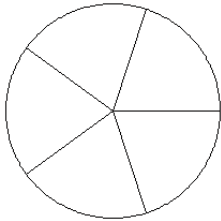


Modèles de Fractions (C)

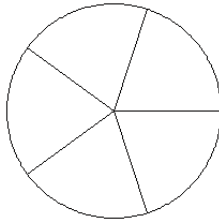
Pour chaque modèle, colorez la portion du cercle représentée par la fraction associée.

1.



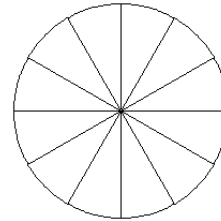
$$\frac{4}{5}$$

2.



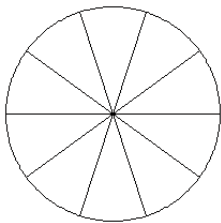
$$\frac{2}{5}$$

3.



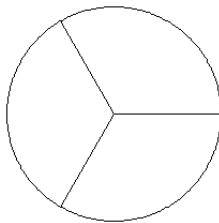
$$\frac{8}{12}$$

4.



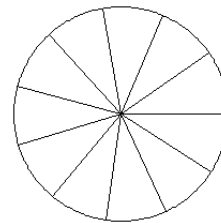
$$\frac{5}{10}$$

5.



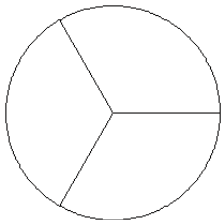
$$\frac{3}{3}$$

6.



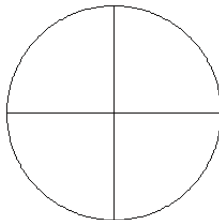
$$\frac{6}{11}$$

7.



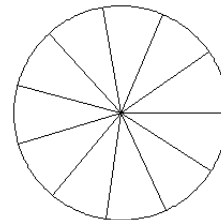
$$\frac{0}{3}$$

8.



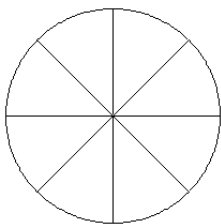
$$\frac{2}{4}$$

9.



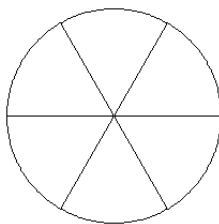
$$\frac{6}{11}$$

10.



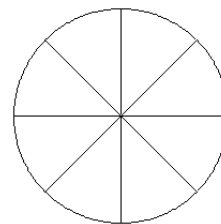
$$\frac{3}{8}$$

11.



$$\frac{5}{6}$$

12.

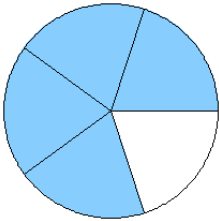


$$\frac{4}{8}$$

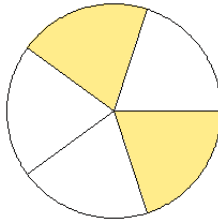
Modèles de Fractions (C) Solutions

Pour chaque modèle, colorez la portion du cercle représentée par la fraction associée.

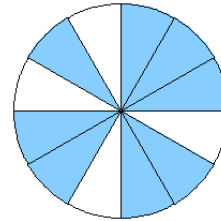
1.



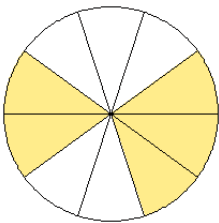
2.



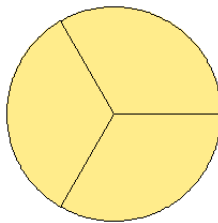
3.



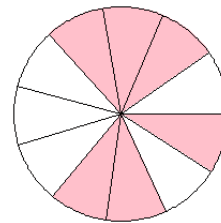
4.



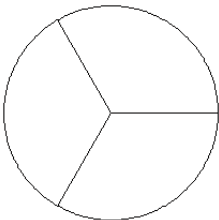
5.



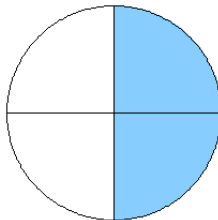
6.



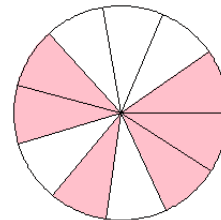
7.



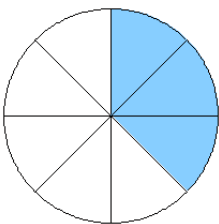
8.



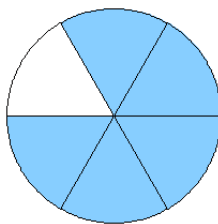
9.



10.



11.



12.

