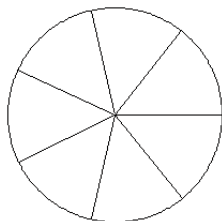


Modèles de Fractions (B)

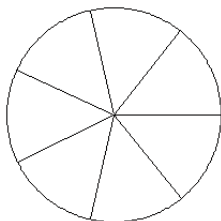
Pour chaque modèle, colorez la portion du cercle représentée par la fraction associée.

1.



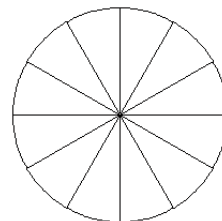
$$\frac{3}{7}$$

2.



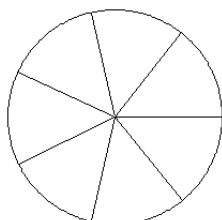
$$\frac{1}{7}$$

3.



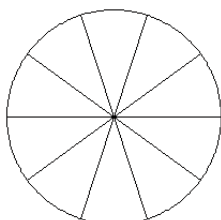
$$\frac{10}{12}$$

4.



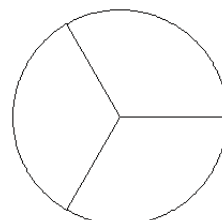
$$\frac{3}{7}$$

5.



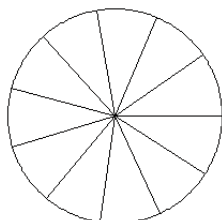
$$\frac{4}{10}$$

6.



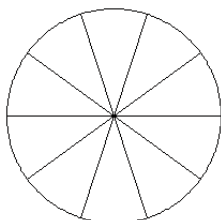
$$\frac{2}{3}$$

7.



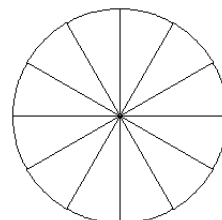
$$\frac{4}{11}$$

8.



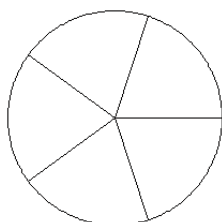
$$\frac{5}{10}$$

9.



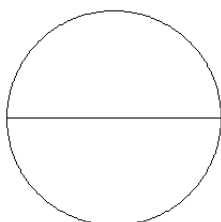
$$\frac{6}{12}$$

10.



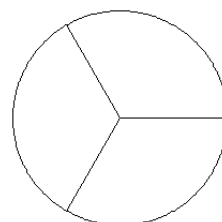
$$\frac{5}{5}$$

11.



$$\frac{1}{2}$$

12.



$$\frac{1}{3}$$