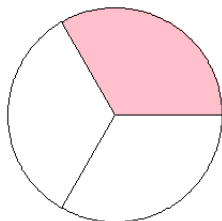


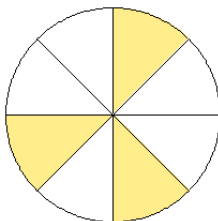
# Modèles de Fractions (A)

Quelle fraction représente chaque modèle?

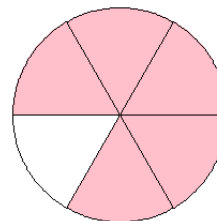
1.



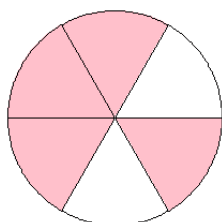
2.



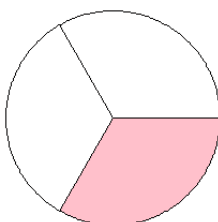
3.



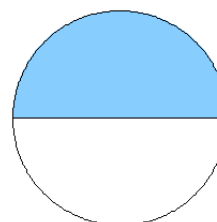
4.



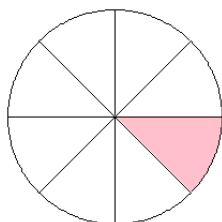
5.



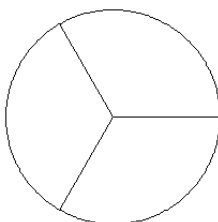
6.



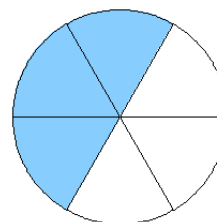
7.



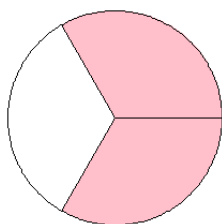
8.



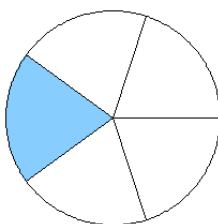
9.




10.



11.



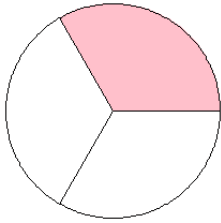
12.



# Modèles de Fractions (A) Solutions

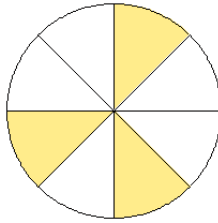
Quelle fraction représente chaque modèle?

1.



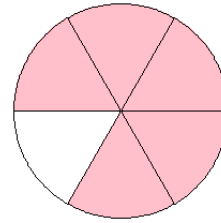
$$= \frac{1}{3}$$

2.



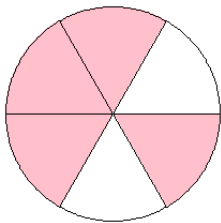
$$= \frac{3}{8}$$

3.



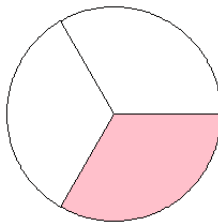
$$= \frac{5}{6}$$

4.



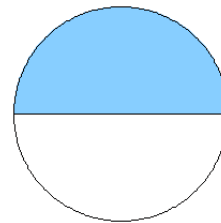
$$= \frac{4}{6}$$

5.



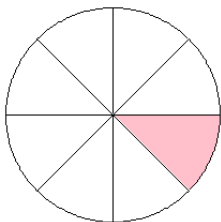
$$= \frac{1}{3}$$

6.



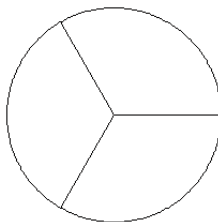
$$= \frac{1}{2}$$

7.



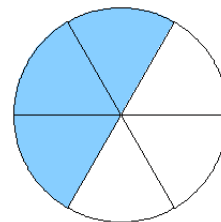
$$= \frac{1}{8}$$

8.



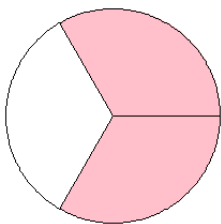
$$= \frac{0}{3}$$

9.



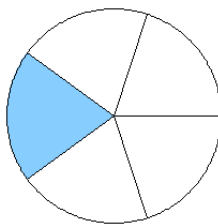
$$= \frac{3}{6}$$

10.




$$= \frac{2}{3}$$

11.



$$= \frac{1}{5}$$

12.



$$= \frac{2}{2}$$