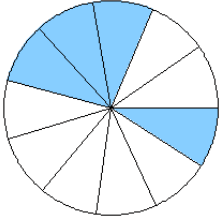


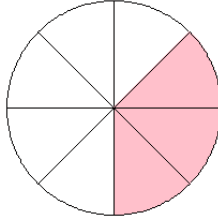
# Modèles de Fractions (J)

Quelle fraction représente chaque modèle?

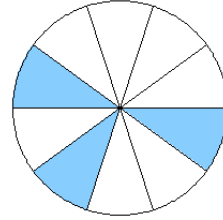
1.



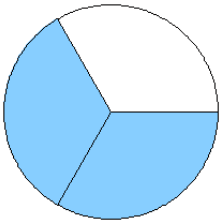
2.



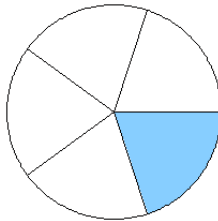
3.



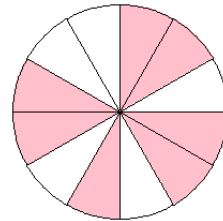
4.



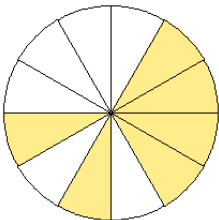
5.



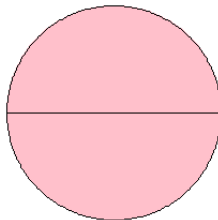
6.



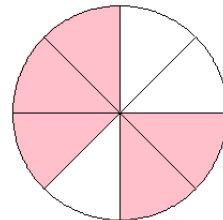
7.



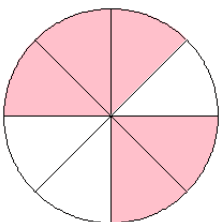
8.



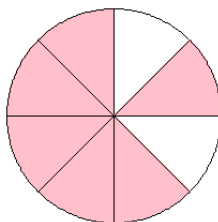
9.



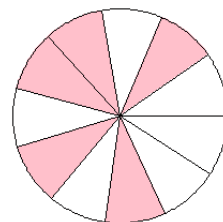
10.



11.



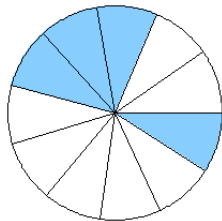
12.



# Modèles de Fractions (J) Solutions

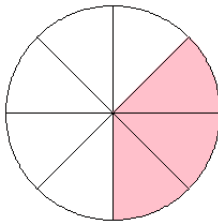
Quelle fraction représente chaque modèle?

1.



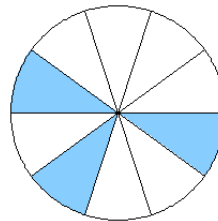
$$= \frac{4}{11}$$

2.



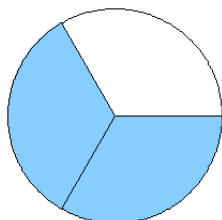
$$= \frac{3}{8}$$

3.



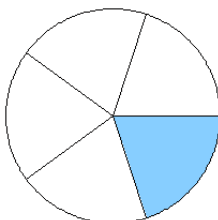
$$= \frac{3}{10}$$

4.



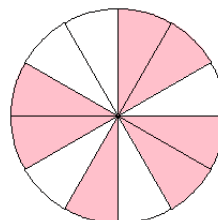
$$= \frac{2}{3}$$

5.



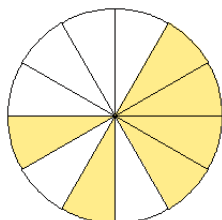
$$= \frac{1}{5}$$

6.



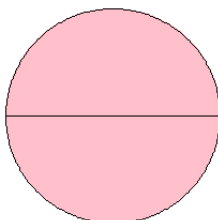
$$= \frac{7}{12}$$

7.



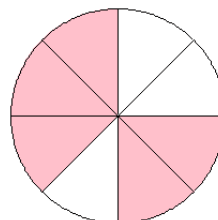
$$= \frac{6}{12}$$

8.



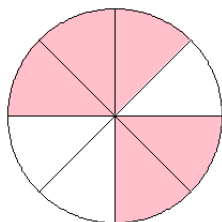
$$= \frac{2}{2}$$

9.



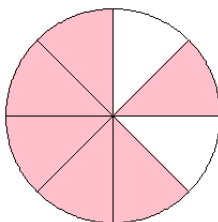
$$= \frac{5}{8}$$

10.



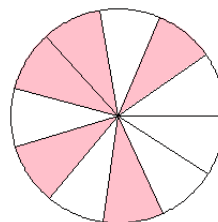
$$= \frac{5}{8}$$

11.



$$= \frac{6}{8}$$

12.



$$= \frac{5}{11}$$