



Parts d'un Ensemble (B)



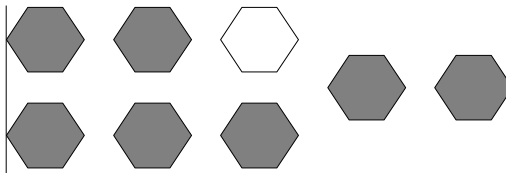
Il y a six carrés dans cet ensemble. Deux de ces carrés ont été ombragés.

$\frac{2}{6}$ carrés ombragés
6 carrés dans l'ensemble

Pour chaque ensemble, écrivez la portion de l'ensemble qui est ombragé.



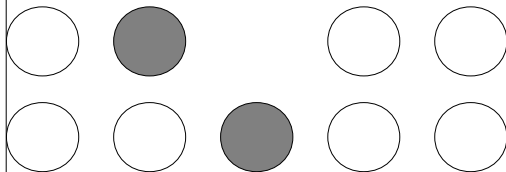
—




—



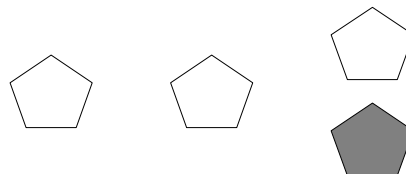
—




—



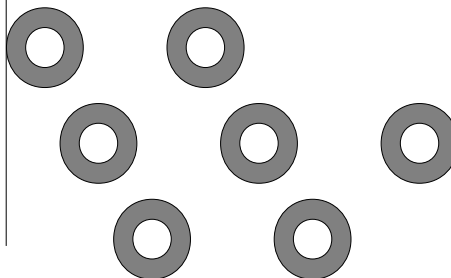
—



—



—



—

David colored two of the squares in a group of five squares. What fraction could he write? —