



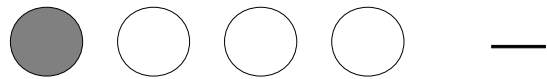
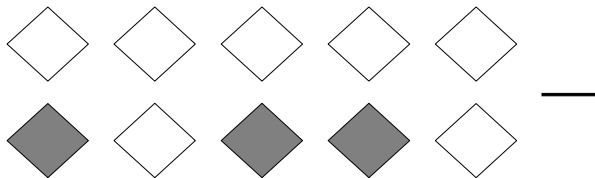
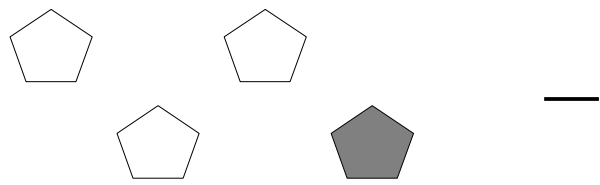

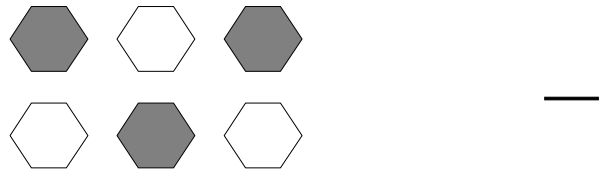
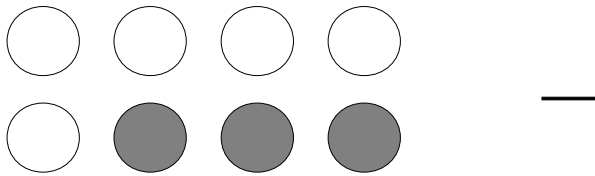
Parts d'un Ensemble (A)



Il y a six carrés dans cet ensemble. Deux de ces carrés ont été ombragés.

$\frac{2}{6}$ carrés ombragés
6 carrés dans l'ensemble

Pour chaque ensemble, écrivez la portion de l'ensemble qui est ombragé.



Jenny colored five of the triangles in a group of seven triangles. What fraction could she write? _____