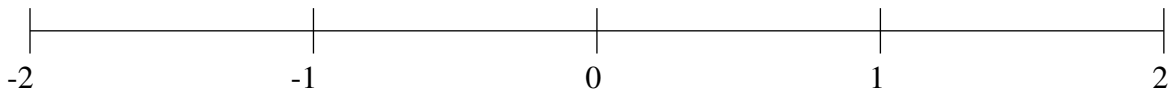


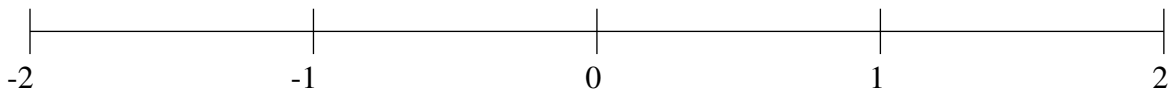
Classification de Fractions (H)

À l'aide des droites numériques, classifiez chaque série de fractions ci-dessous en ordre croissant.

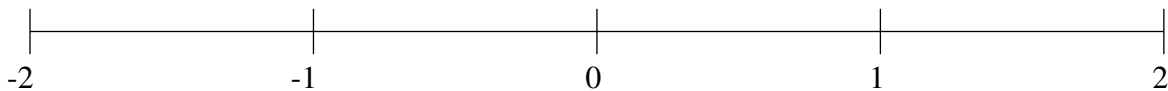
$$-\frac{2}{19}, -1\frac{16}{89}, \frac{83}{84}, 1\frac{2}{3}, -\frac{1}{2}$$



$$\frac{2}{5}, \frac{1}{14}, 1\frac{12}{13}, 1\frac{3}{13}, -\frac{2}{3}$$



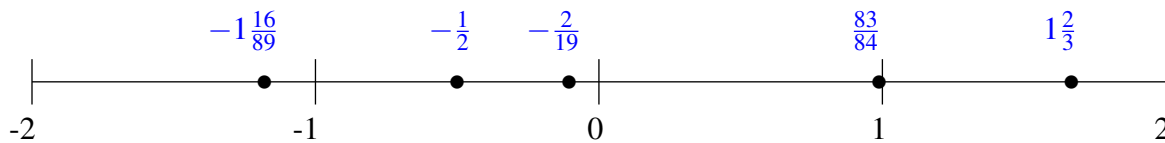
$$-1\frac{10}{11}, 1\frac{2}{3}, \frac{31}{71}, -1\frac{5}{47}, -\frac{1}{2}$$



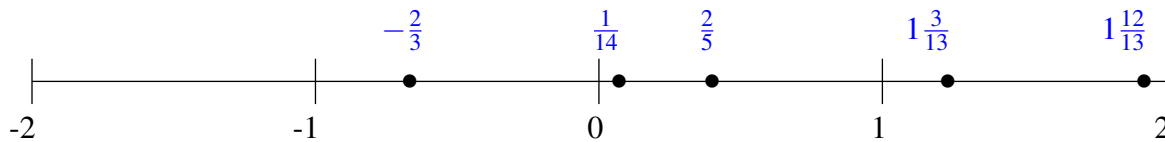
Classification de Fractions (H) Solutions

À l'aide des droites numériques, classifiez chaque série de fractions ci-dessous en ordre croissant.

$$-\frac{2}{19}, -1\frac{16}{89}, \frac{83}{84}, 1\frac{2}{3}, -\frac{1}{2}$$



$$\frac{2}{5}, \frac{1}{14}, 1\frac{12}{13}, 1\frac{3}{13}, -\frac{2}{3}$$



$$-1\frac{10}{11}, 1\frac{2}{3}, \frac{31}{71}, -1\frac{5}{47}, -\frac{1}{2}$$

